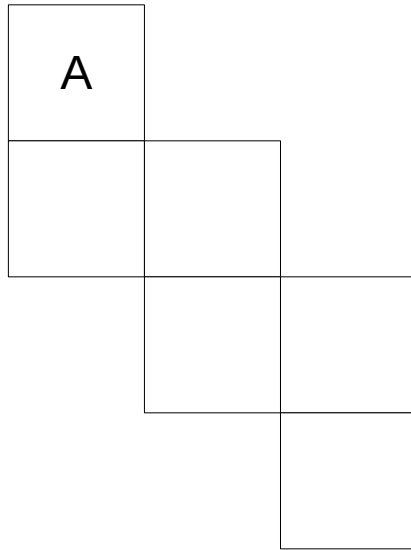


1

Here is the net of a cube.

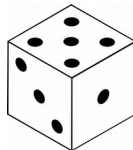
Shade the face that will be opposite face A when the net is folded into a cube



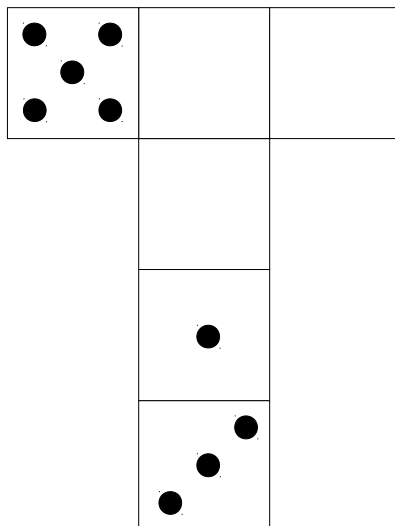
1 mark

2

On a dice, the sum of the dots on opposite faces is always 7.



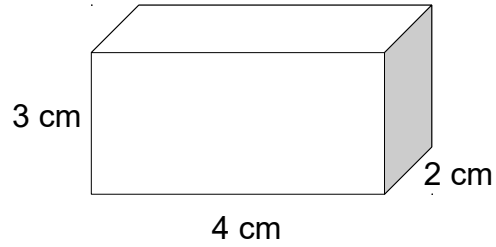
Draw the dots on the three empty faces so that it could fold up to make a dice.




1 mark

3

A cuboid has length 4 cm, width 2 cm and depth 2 cm.



Draw a net for the cuboid below.



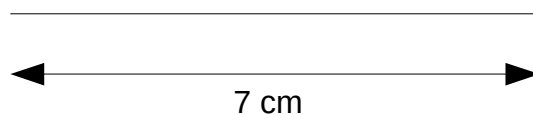
2 marks

4

Draw an equilateral triangle with sides of 7 cm **accurately** below.

Use an angle measurer (protractor) and a ruler.

One line has been drawn for you.

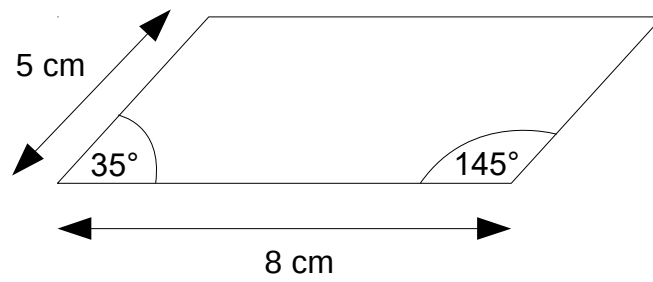


2 marks

5

Here is a sketch of a parallelogram

It is not drawn to scale.

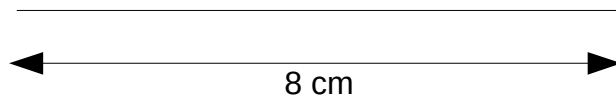


**Not to scale**

Draw the full-size parallelogram **accurately** below.

Use an angle measurer (protractor) and a ruler.

One line has been drawn for you.

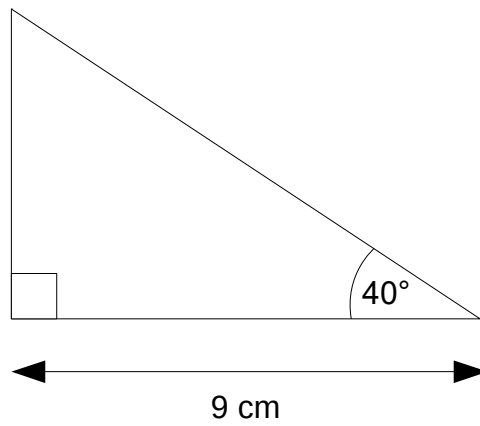


2 marks

6

Here is a sketch of a triangle.

It is not drawn to scale.

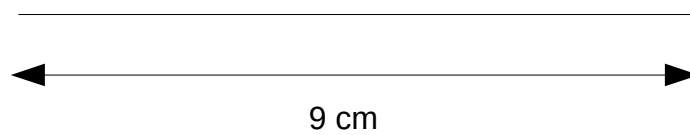


**Not to  
scale**

Draw the full-size triangle **accurately** below.

Use an angle measurer (protractor) and a ruler.

One line has been drawn for you.



2 marks