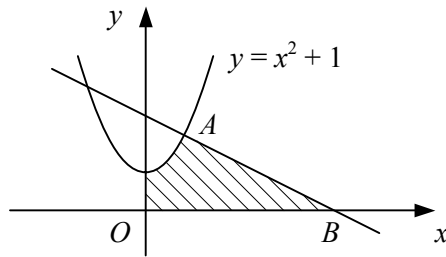


1



The diagram shows the curve $y = x^2 + 1$ which passes through the point $A(1, 2)$.

a Find an equation of the normal to the curve at the point A .

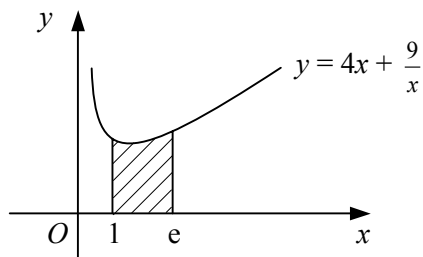
The normal to the curve at A meets the x -axis at the point B as shown.

b Find the coordinates of B .

The shaded region bounded by the curve, the coordinate axes and the line AB is rotated through 2π radians about the x -axis.

c Show that the volume of the solid formed is $\frac{36}{5}\pi$.

2



The shaded region in the diagram is bounded by the curve with equation $y = 4x + \frac{9}{x}$, the x -axis and the lines $x = 1$ and $x = e$.

a Find the area of the shaded region, giving your answer in terms of e .

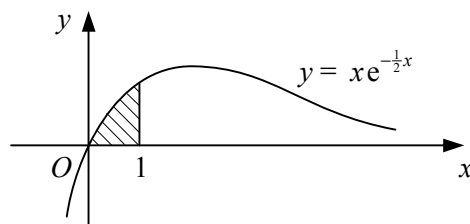
b Find, to 3 significant figures, the volume of the solid formed when the shaded region is rotated completely about the x -axis.

3 The region enclosed by the given curve, the x -axis and the given ordinates is rotated through 2π radians about the x -axis. Find the exact volume of the solid formed in each case.

a $y = \operatorname{cosec} x$, $x = \frac{\pi}{6}$, $x = \frac{\pi}{3}$ **b** $y = \sqrt{\frac{x+3}{x+2}}$, $x = 1$, $x = 4$

c $y = 1 + \cos 2x$, $x = 0$, $x = \frac{\pi}{4}$ **d** $y = x^{\frac{1}{2}}e^{2-x}$, $x = 1$, $x = 2$

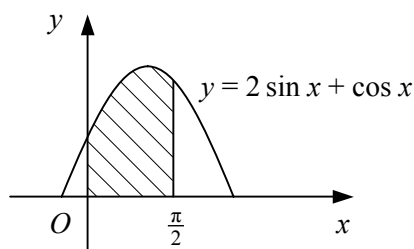
4



The shaded region in the diagram, bounded by the curve $y = xe^{-\frac{1}{2}x}$, the x -axis and the line $x = 1$, is rotated through 360° about the x -axis.

Show that the volume of the solid formed is $\pi(2 - 5e^{-1})$.

5

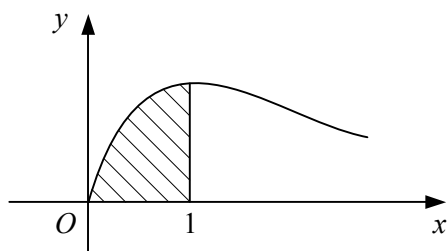


The diagram shows part of the curve with equation $y = 2 \sin x + \cos x$.

The shaded region is bounded by the curve in the interval $0 \leq x < \frac{\pi}{2}$, the positive coordinate axes and the line $x = \frac{\pi}{2}$.

- Find the area of the shaded region.
- Show that the volume of the solid formed when the shaded region is rotated through 2π radians about the x -axis is $\frac{1}{4}\pi(5\pi + 8)$.

6



The diagram shows part of the curve with parametric equations

$$x = \tan \theta, \quad y = \sin 2\theta, \quad 0 \leq \theta < \frac{\pi}{2}.$$

The shaded region is bounded by the curve, the x -axis and the line $x = 1$.

- Write down the value of the parameter θ at the points where $x = 0$ and where $x = 1$.

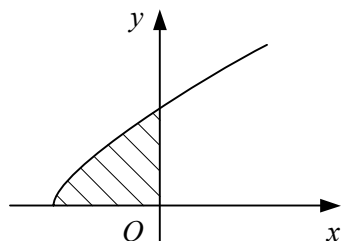
The shaded region is rotated through 2π radians about the x -axis.

- Show that the volume of the solid formed is given by

$$4\pi \int_0^{\frac{\pi}{4}} \sin^2 \theta \, d\theta.$$

- Evaluate this integral.

7



The diagram shows part of the curve with parametric equations

$$x = t^2 - 1, \quad y = t(t + 1), \quad t \geq 0.$$

- Find the value of the parameter t at the points where the curve meets the coordinate axes.

The shaded region bounded by the curve and the coordinate axes is rotated through 2π radians about the x -axis.

- Find the volume of the solid formed, giving your answer in terms of π .