

Write your name here

Surname

Other names

**Pearson**  
**Edexcel GCSE**

Centre Number

--	--	--	--	--	--

Candidate Number

--	--	--	--	--

# 2015 Predicted Paper 1

**Higher Tier**

**Time: 1 hour 45 minutes**

Paper Reference

**1MA0/1H**

**You must have:** Ruler graduated in centimetres and millimetres, protractor, pair of compasses, pen, HB pencil, eraser. Tracing paper may be used.

Total Marks



## Instructions

- Use **black** ink or ball-point pen.
- **Fill in the boxes** at the top of this page with your name, centre number and candidate number.
- Answer **all** questions.
- Answer the questions in the spaces provided – *there may be more space than you need.*
- **Calculators must not be used.**

## Information

- The total mark for this paper is 100
- The marks for **each** question are shown in brackets – *use this as a guide as to how much time to spend on each question.*
- Questions labelled with an **asterisk** (\*) are ones where the quality of your written communication will be assessed.

## Advice

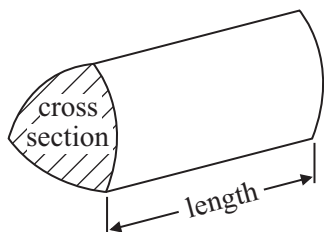
- Read each question carefully before you start to answer it.
- Keep an eye on the time.
- Try to answer every question.
- Check your answers if you have time at the end.

## GCSE Mathematics

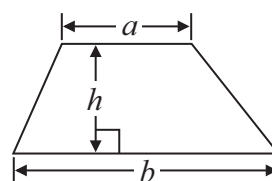
Formulae: Higher Tier

**You must not write on this formulae page.  
Anything you write on this formulae page will gain NO credit.**

**Volume of prism** = area of cross section  $\times$  length

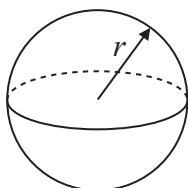


**Area of trapezium** =  $\frac{1}{2} (a + b)h$



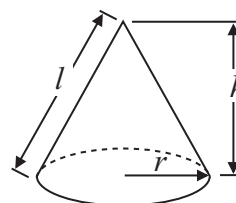
**Volume of sphere** =  $\frac{4}{3} \pi r^3$

**Surface area of sphere** =  $4\pi r^2$

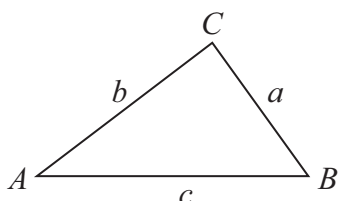


**Volume of cone** =  $\frac{1}{3} \pi r^2 h$

**Curved surface area of cone** =  $\pi r l$



**In any triangle ABC**



**The Quadratic Equation**

The solutions of  $ax^2 + bx + c = 0$   
where  $a \neq 0$ , are given by

$$x = \frac{-b \pm \sqrt{b^2 - 4ac}}{2a}$$

**Sine Rule**  $\frac{a}{\sin A} = \frac{b}{\sin B} = \frac{c}{\sin C}$

**Cosine Rule**  $a^2 = b^2 + c^2 - 2bc \cos A$

**Area of triangle** =  $\frac{1}{2} ab \sin C$

**Answer ALL questions.**

**Write your answers in the spaces provided.**

**You must write down all stages in your working.**

**You must NOT use a calculator.**

- 1** A set of tyres normally costs £500  
In a sale there is a 30% discount.

Work out the sale price of the set of tyres.

£.....

---

**(Total for Question 1 is 3 marks)**

- 2** (a) Simplify  $3e + 2f - e - 3f$

.....  
(2)

- (b) Expand  $2(3x + 5)$

.....  
(2)

---

**(Total for Question 2 is 4 marks)**

3 Tendai is doing a survey to find out how often people travel by bus. She is going to ask 10 women leaving a railway station.

(a) This may **not** produce a good sample for Tendai's survey. Give 2 reasons why.

Reason 1 .....

.....

.....

Reason 2 .....

.....

.....

(2)

(b) Design a suitable question for Tendai to use on a questionnaire to find out the number of times people travel by bus.

(2)

**(Total for Question 3 is 4 marks)**

---

4 Here are the heights, in centimetres, of 15 children.

123	147	135	150	147
129	148	149	125	137
133	138	133	130	151

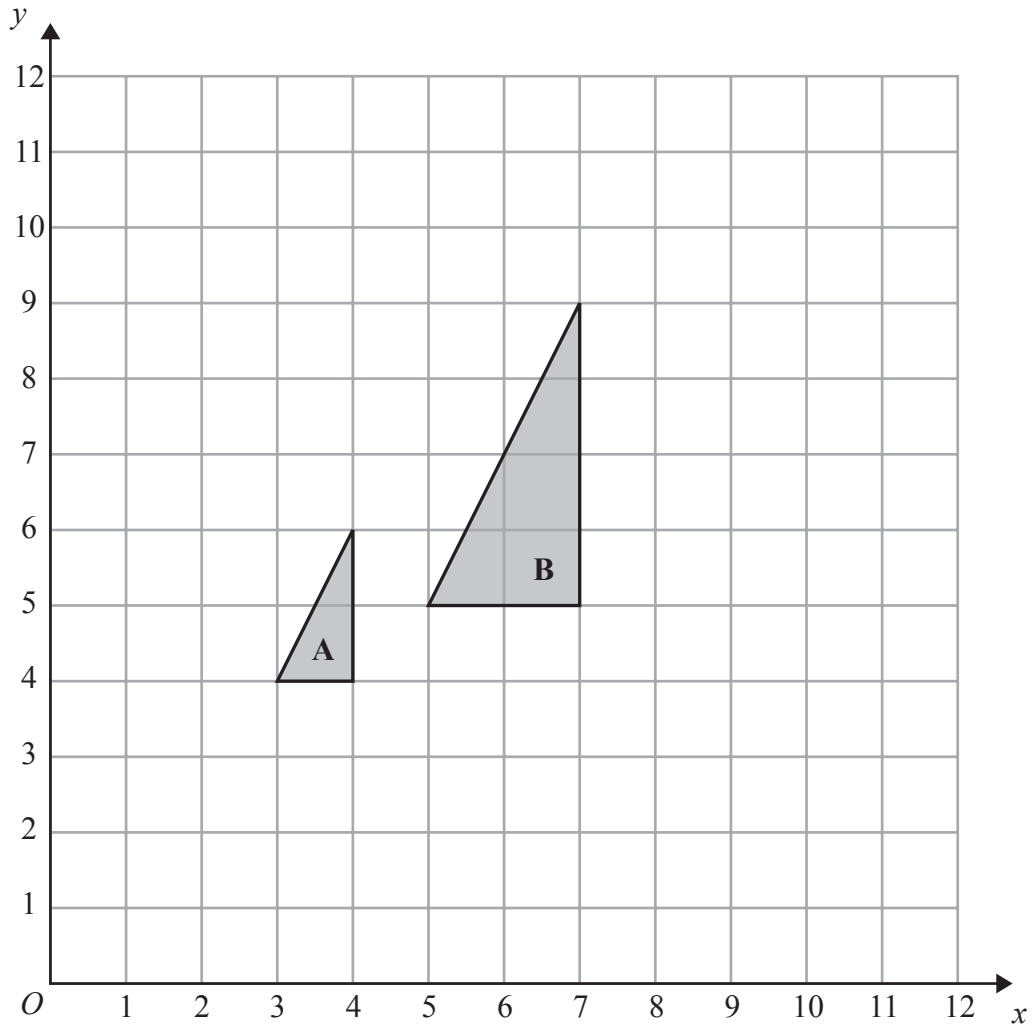
Show this information in an ordered stem and leaf diagram.



---

**(Total for Question 4 is 4 marks)**

5



(a) Describe fully the single transformation that maps triangle A onto triangle B.

.....  
.....

(3)

(b) On the grid, translate triangle A by the vector  $\begin{pmatrix} 5 \\ -2 \end{pmatrix}$

(1)

(Total for Question 5 is 4 marks)

6 Here is a list of ingredients for making a peach dessert for 6 people.

Peach dessert for 6 people.

150 g jelly  
10 sponge fingers  
500 ml custard  
200 g peaches

Bob is going to make a peach dessert for 15 people.

Work out the amount of each ingredient he needs.

..... g jelly

..... sponge fingers

..... ml custard

..... g peaches

**(Total for Question 6 is 3 marks)**

---

\*7 140 children will be at a school sports day.  
Lily is going to give a cup of orange drink to each of the 140 children.  
She is going to put 200 millilitres of orange drink in each cup.

The orange drink is made from orange squash and water.  
The orange squash and water are mixed in the ratio 1 : 9 by volume.

Orange squash is sold in bottles containing 750 millilitres.

Work out how many bottles of orange squash Lily needs to buy.  
You must show all your working.

---

**(Total for Question 7 is 4 marks)**



8 Sally is going to buy some packs of blue paint and some packs of white paint.

Blue paint is sold in packs of 12 tubes.

White paint is sold in packs of 15 tubes.

Sally is going to put all the tubes of paint she buys into boxes.

She is going to put 1 tube of blue paint and 1 tube of white paint in each box.

Sally wants to buy the smallest number of packs of blue paint and the smallest number of packs of white paint.

Work out the number of packs of blue paint and the number of packs of white paint she will buy.

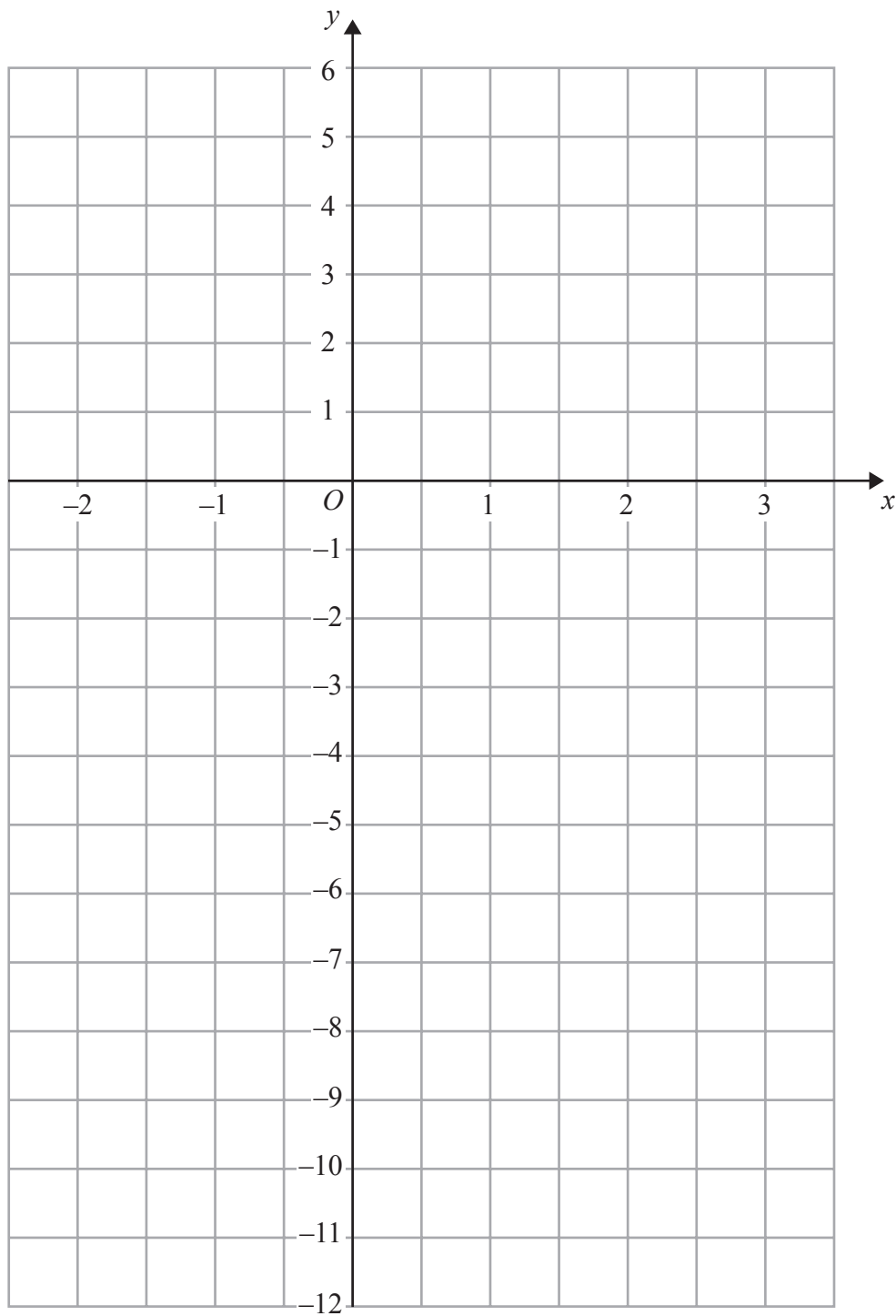
..... packs of blue paint

..... packs of white paint

**(Total for Question 8 is 4 marks)**

---

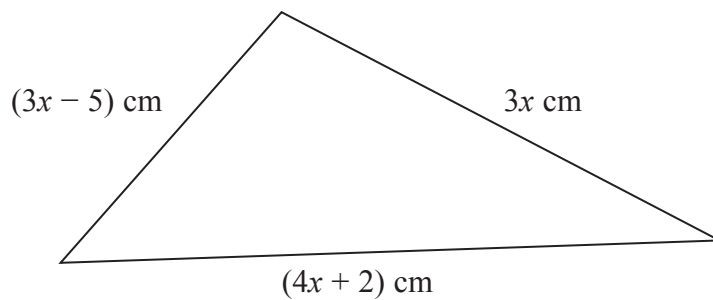
9 On the grid, draw the graph of  $y = 3x - 4$  for values of  $x$  from  $-2$  to  $3$



(Total for Question 9 is 4 marks)

10 The diagram shows a triangle.

Diagram **NOT**  
accurately drawn



The lengths of the sides of the triangle are  $3x \text{ cm}$ ,  $(3x - 5) \text{ cm}$  and  $(4x + 2) \text{ cm}$ .

The perimeter of the triangle is  $62 \text{ cm}$ .

Work out the value of  $x$ .  
Show clear algebraic working.

$x = \dots\dots\dots$

**(Total for Question 10 is 4 marks)**

11 (a) Simplify  $x^2 \times x^4$

.....  
(1)

(b) Simplify  $y^8 \div y^6$

.....  
(1)

(c) Simplify  $(t^2)^3$

.....  
(1)

---

**(Total for Question 11 is 3 marks)**

12 The diagram shows a prism.

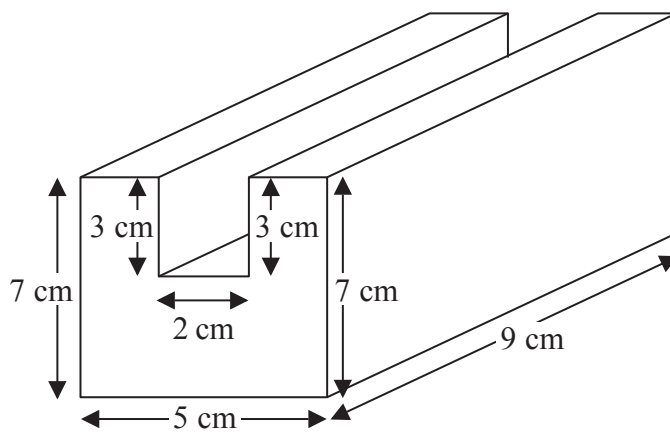


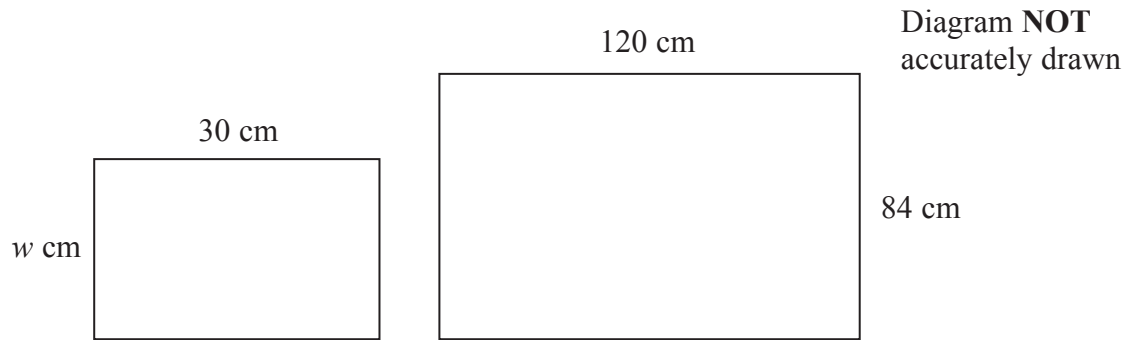
Diagram **NOT**  
accurately drawn

All the corners are right angles.

Work out the volume of the prism.

(Total for Question 12 is 4 marks)

13 The diagram shows two rectangles.



The rectangles are similar.

Work out the value of  $w$ .

---

(Total for Question 13 is 2 marks)

---

- 14 The diagram shows an accurate scale drawing of part of the boundary of a field.  
The complete boundary of the field is in the shape of a quadrilateral  $ABCD$ .

$AB = 300$  metres.

$BC = 230$  metres.

Point  $B$  is due north of point  $C$ .

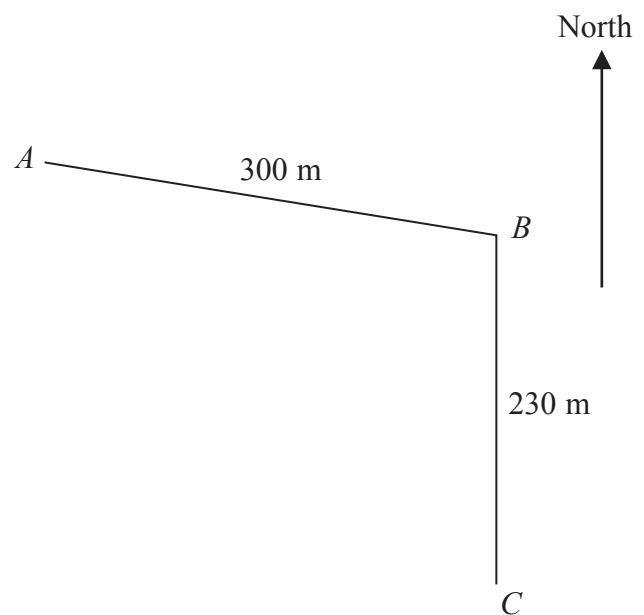
The scale of the diagram is 1 cm to 50 metres.

The bearing of  $D$  from  $C$  is  $260^\circ$

$AD = 480$  metres.

Complete the scale drawing of the boundary of the field.

Mark the position of  $D$ .



(Total for Question 14 is 2 marks)

15 (a) Find the sum of the interior angles of a polygon with 8 sides.

.....  
o

(2)

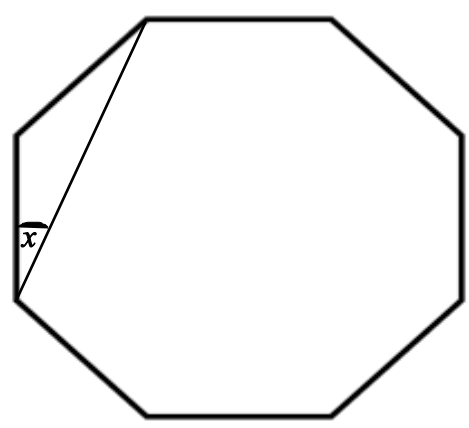


Diagram **NOT**  
accurately drawn

The diagram shows a regular polygon with 8 sides.

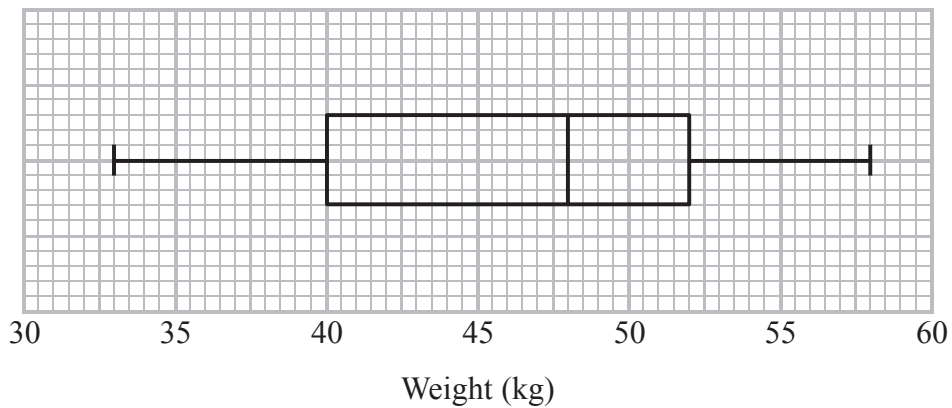
(b) Work out the value of  $x$ .

.....  
(2)

**(Total for Question 15 is 4 marks)**



16 The box plot gives information about the weights of a group of children.



(a) Write down the median.

..... kg  
(1)

(b) Work out the interquartile range.

..... kg  
(1)

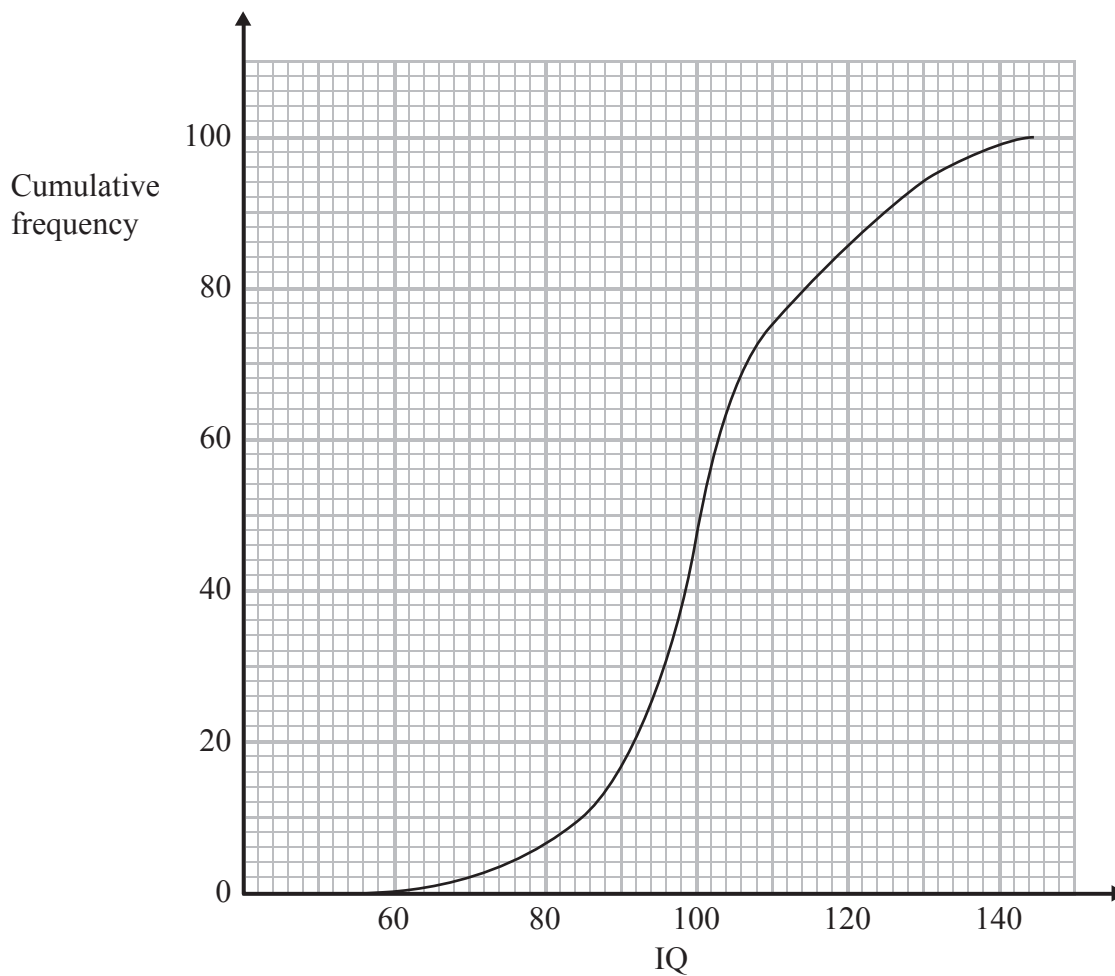
There are 80 children in the group.

(c) Work out an estimate for the number of children who weigh 52 kg or more.

.....  
(2)

**(Total for Question 16 is 4 marks)**

- 17 The cumulative frequency graph gives information about the intelligence quotients (IQ) of a random sample of 100 adults.



- (a) Use the cumulative frequency graph to find an estimate for the number of adults in the sample who have an IQ between 85 and 115

.....  
(2)

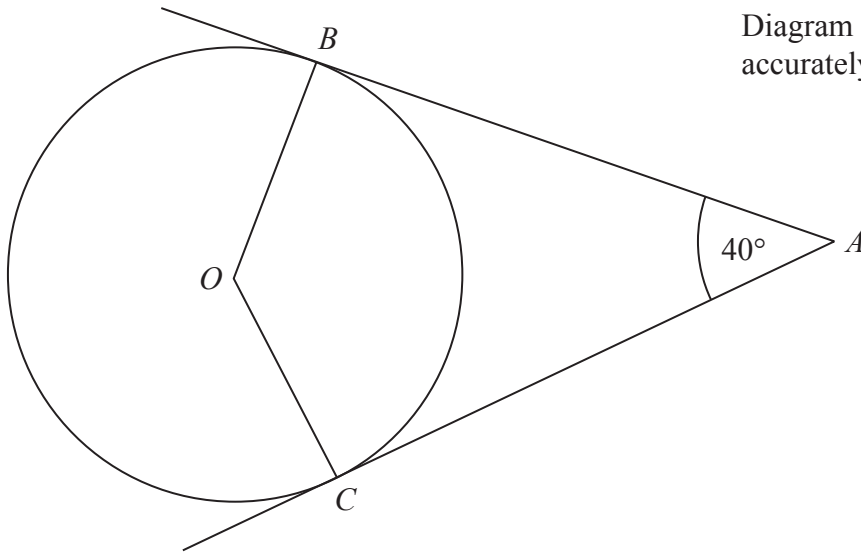
- (b) Find an estimate for the upper quartile of the IQ of adults in the sample.

.....  
(2)

**(Total for Question 17 is 4 marks)**

\*18

Diagram **NOT**  
accurately drawn



*B* and *C* are points on the circumference of a circle, centre *O*.  
*AB* and *AC* are tangents to the circle.  
Angle  $BAC = 40^\circ$ .

Find the size of angle  $BCO$ .

o

(Total for Question 18 is 3 marks)

**19** (a) Write  $1.2 \times 10^{-5}$  as an ordinary number.

.....  
(1)

(b) Work out  $7.9 \times 10^5 + 6 \times 10^4$   
Give your answer in standard form.

.....  
(2)

---

**(Total for Question 19 is 3 marks)**

---

**20** Solve the simultaneous equations

$$3x + 2y = 7$$

$$4x - 3y = 15$$

Show clear algebraic working.

$x =$  .....

$y =$  .....

---

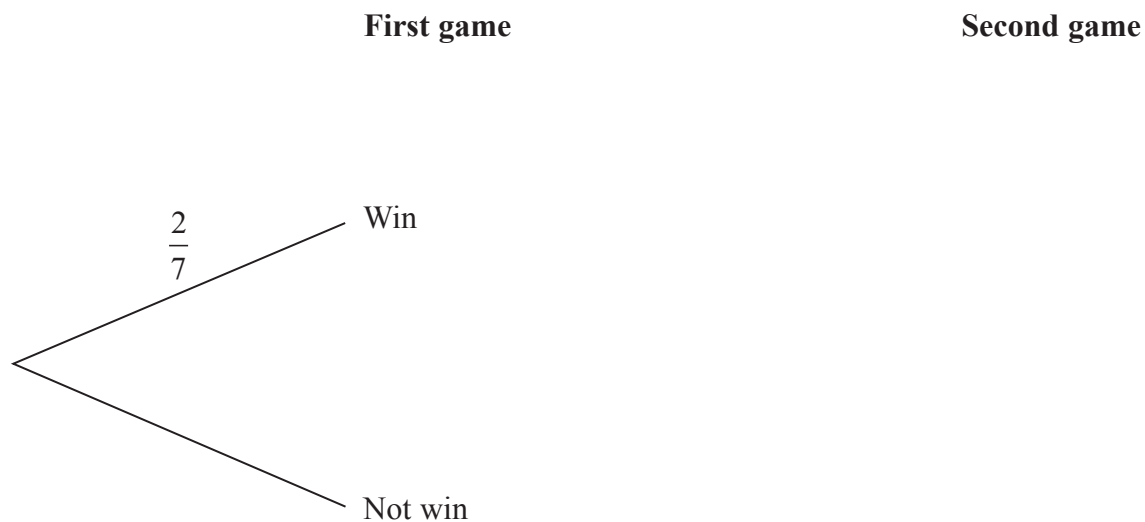
**(Total for Question 20 is 4 marks)**

---

**21** Amberish plays two games of tennis.

Each time he plays a game of tennis, the probability that he will win is  $\frac{2}{7}$

(a) Complete the probability tree diagram.



(3)

(b) Calculate the probability that Amberish wins at least one of the two games of tennis.

(3)

**(Total for Question 21 is 6 marks)**

22 (a) Factorise  $c^2 - 5c$

.....  
(2)

(b) Simplify  $(2d)^0$

.....  
(1)

(c) Factorise  $x^2 + x - 30$

.....  
(2)

(d) Make  $b$  the subject of  $P = \frac{1}{2}ab^2$

$b =$  .....  
(2)

(e) Solve  $\frac{2x+1}{3} + \frac{x-5}{2} = 4$

Show clear algebraic working.

$x =$  .....  
(4)

**(Total for Question 22 is 11 marks)**

**23** The straight line **L** has equation  $y = 2x - 5$

Find an equation of the straight line perpendicular to **L** which passes through  $(-2, 3)$ .

---

(Total for Question 23 is 3 marks)

---

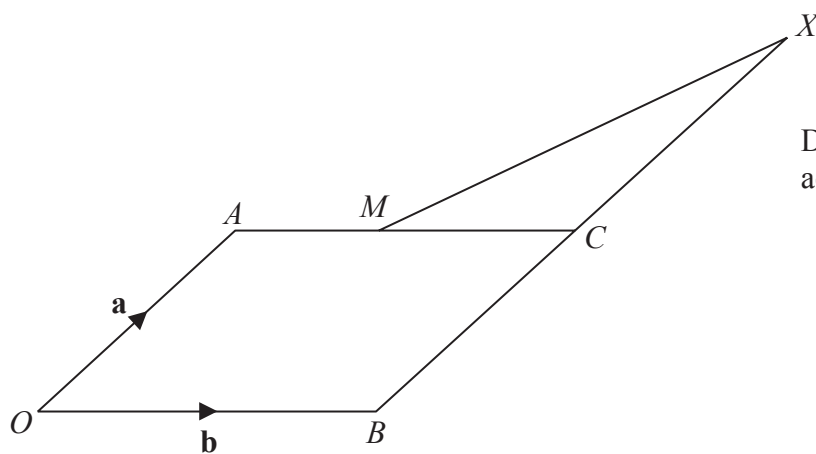


Diagram **NOT**  
accurately drawn

$OACB$  is a parallelogram.

$M$  is the midpoint of  $AC$ .

$C$  is the midpoint of the straight line  $BCX$ .

$$\vec{OA} = \mathbf{a} \quad \vec{OB} = \mathbf{b}$$

Prove that  $OMX$  is a straight line.



25 A trapezium  $ABCD$  has an area of  $5\sqrt{6}$  cm<sup>2</sup>.

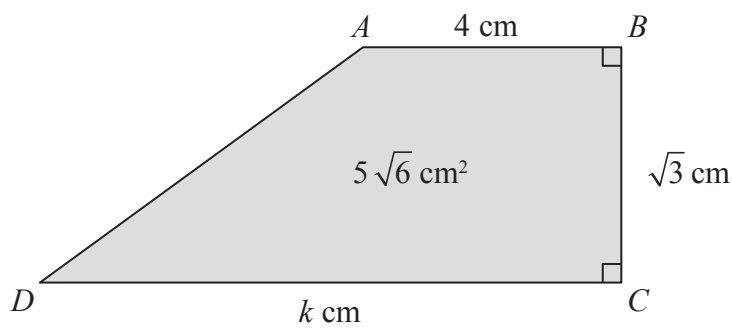


Diagram **NOT** accurately drawn

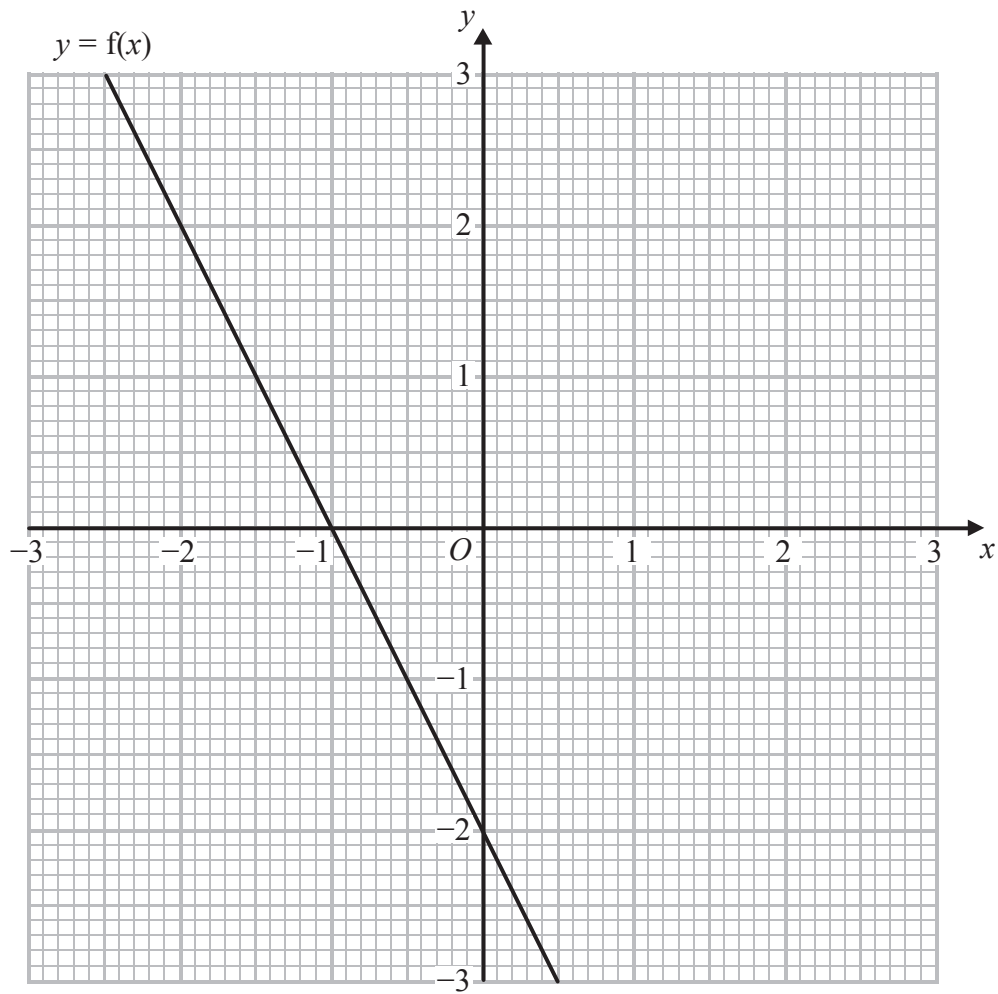
$AB = 4$  cm.  
 $BC = \sqrt{3}$  cm.  
 $DC = k$  cm.

Calculate the value of  $k$ , giving your answer in the form  $a\sqrt{b} - c$  where  $a$ ,  $b$  and  $c$  are positive integers.  
Show each step in your working.

$k = \dots\dots\dots$

(Total for Question 25 is 3 marks)

26 Here is the graph of  $y = f(x)$ .



(a) Write down the coordinates of the point where the graph of  $y = \frac{1}{2}f(x)$  meets the y-axis.

(....., .....)  
(1)

(b) On the grid, draw the graph of  $y = f(x - 1)$ .

(2)

**(Total for Question 26 is 3 marks)**

---

**TOTAL FOR PAPER IS 100 MARKS**