

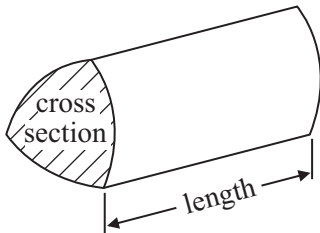
2016 Calculator Test 5 Name: _____

GCSE Mathematics 1MA0

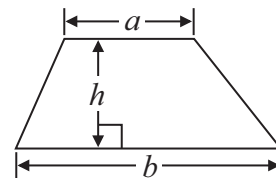
Formulae: Higher Tier

**You must not write on this formulae page.
Anything you write on this formulae page will gain NO credit.**

Volume of prism = area of cross section \times length

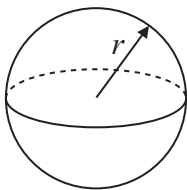


Area of trapezium = $\frac{1}{2} (a + b)h$



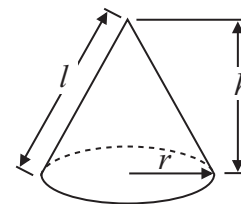
Volume of sphere = $\frac{4}{3} \pi r^3$

Surface area of sphere = $4\pi r^2$

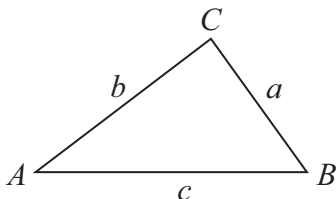


Volume of cone = $\frac{1}{3} \pi r^2 h$

Curved surface area of cone = $\pi r l$



In any triangle ABC



The Quadratic Equation

The solutions of $ax^2 + bx + c = 0$
where $a \neq 0$, are given by

$$x = \frac{-b \pm \sqrt{b^2 - 4ac}}{2a}$$

Sine Rule $\frac{a}{\sin A} = \frac{b}{\sin B} = \frac{c}{\sin C}$

Cosine Rule $a^2 = b^2 + c^2 - 2bc \cos A$

Area of triangle = $\frac{1}{2} ab \sin C$

Answer ALL questions.

Write your answers in the spaces provided.

You must write down all stages in your working.

1 (a) Use your calculator to work out $\frac{\sqrt{7056}}{0.35 \times 12.8}$

Write down all the figures on your calculator display.

You must give your answer as a decimal.

.....
(2)

(b) Write your answer to part (a) correct to 1 significant figure.

.....
(1)

(Total for Question 1 is 3 marks)

2 Pavel and Katie share some sweets in the ratio 3 : 8
Katie gets 32 sweets.

(a) How many sweets does Pavel get?

.....
(2)

Katie also has a tin of chocolates.

There are 80 chocolates in the tin.

45% of the chocolates have toffee in the middle.

(b) Work out the number of chocolates that have toffee in the middle.

.....
(2)

(Total for Question 2 is 4 marks)

3 Bill has some counters in a bag.

3 of the counters are red.

7 of the counters are blue.

The rest of the counters are yellow.

Bill takes at random a counter from the bag.

The probability that he takes a yellow counter is $\frac{2}{7}$

How many yellow counters are in the bag before Bill takes a counter?

.....
(Total for Question 3 is 2 marks)

4 The diagram shows a solid prism.

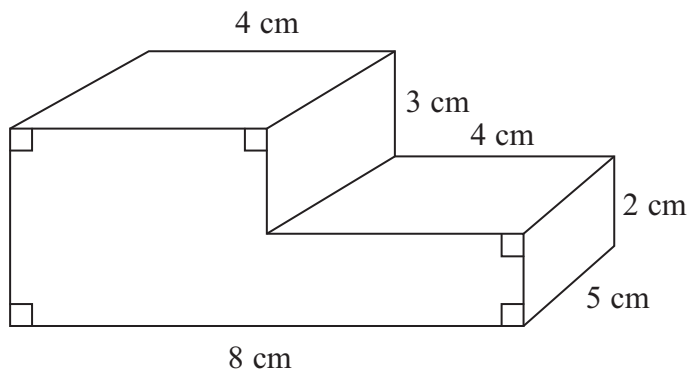



Diagram **NOT** accurately drawn

On the centimetre square grid, draw the side elevation of the solid prism from the direction shown by the arrow.



(Total for Question 4 is 2 marks)

5 Ben goes on holiday to Hong Kong.

In Hong Kong, Ben sees a camera costing HK\$3179.55

In London, an identical camera costs £285

The exchange rate is £1 = HK\$12.30

Ben buys the camera in Hong Kong.

How much cheaper is the camera in Hong Kong than in London?

.....
(Total for Question 5 is 3 marks)

6 There are 130 adults at a language school.
Each adult studies one of French or Spanish or German.

96 of the adults are women.

12 of the women study French.

73 of the adults study Spanish.

55 of the women study Spanish.

9 of the men study German.

How many of the adults study French?

.....
(Total for Question 6 is 4 marks)

*7 Plants are sold in three different sizes of tray.

A small tray of 30 plants costs £6.50

A medium tray of 40 plants costs £8.95

A large tray of 50 plants costs £10.99

Kaz wants to buy the tray of plants that is the best value for money.

Which size tray of plants should she buy?

You must show all your working.

(Total for Question 7 is 4 marks)

8 Here are the first four terms of an arithmetic sequence.

3

10

17

24

(a) Find, in terms of n , an expression for the n th term of this arithmetic sequence.

.....
(2)

(b) Is 150 a term of this sequence?

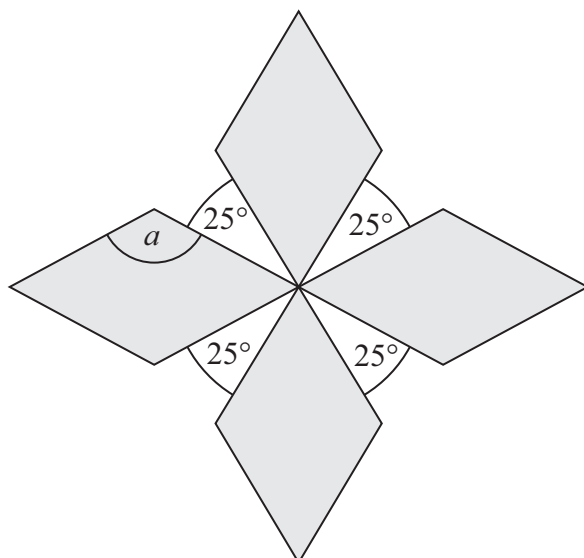
You must explain how you get your answer.

.....
(2)

.....
(Total for Question 8 is 4 marks)
.....

9 The diagram shows a pattern using four identical rhombuses.

Diagram **NOT**
accurately drawn



Work out the size of the angle marked a .
You must show your working.

o

.....

(Total for Question 9 is 4 marks)

10 Sasha takes a music exam.

The table shows the result that Sasha can get for different percentages in her music exam.

| Percentage | Result |
|------------|-------------|
| 50% – 69% | Pass |
| 70% – 84% | Merit |
| 85% – 100% | Distinction |

Sasha gets 62 out of 80 in her music exam.

What result does Sasha get?

You must show your working.

.....
(Total for Question 10 is 3 marks)

11 (a) Simplify $x^7 \times x^3$

.....
(1)

(b) Simplify $(m^4)^3$

.....
(1)

(c) Simplify $\frac{36af^8}{12a^5f^2}$

.....
(2)

(Total for Question 11 is 4 marks)

12 A circle has a diameter of 140 cm.

Work out the circumference of the circle.

Give your answer correct to 3 significant figures.

..... cm

(Total for Question 12 is 2 marks)

13 The table gives information about the temperature, T °C, at noon in a town for 50 days.

| Temperature (T °C) | Frequency |
|-----------------------|-----------|
| $8 < T \leq 12$ | 6 |
| $12 < T \leq 16$ | 8 |
| $16 < T \leq 20$ | 13 |
| $20 < T \leq 24$ | 21 |
| $24 < T \leq 28$ | 2 |

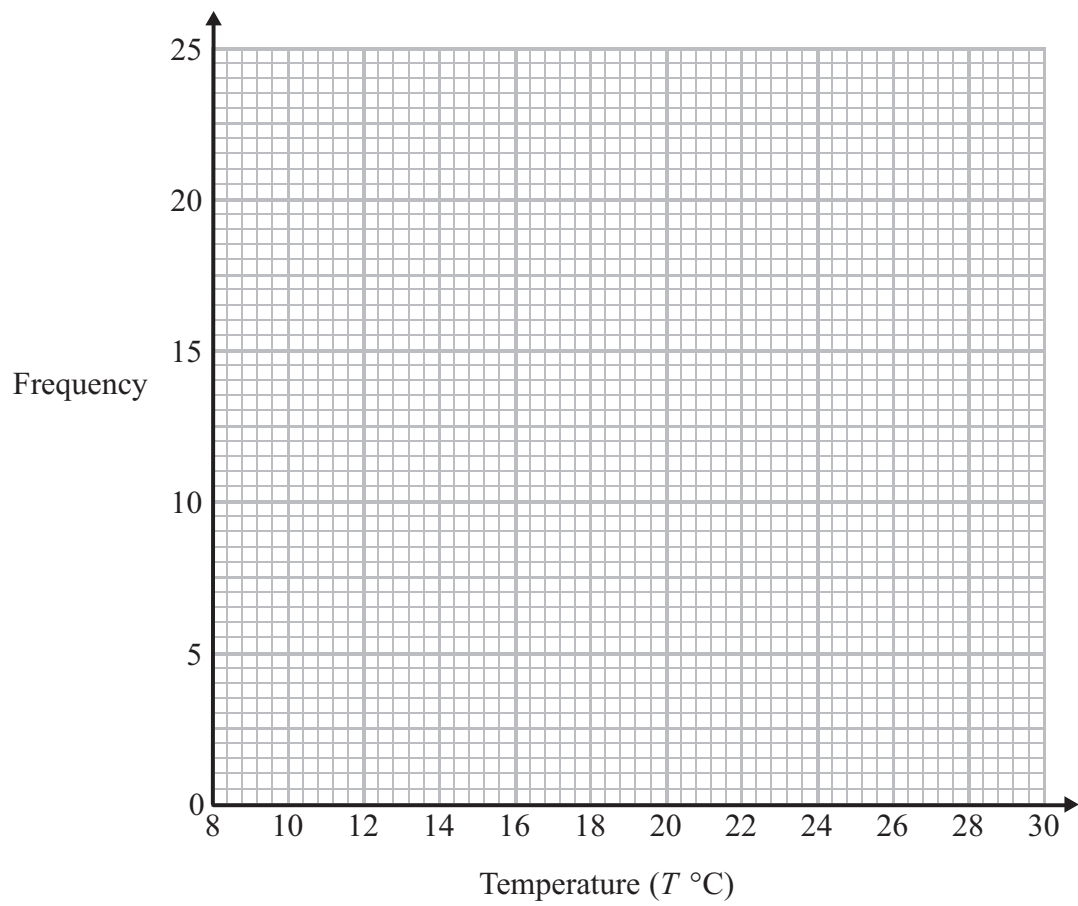
(a) Write down the modal class interval.

.....
(1)

(b) Calculate an estimate for the mean temperature.

..... °C
(4)

(c) Draw a frequency polygon for the information in the table.



(2)

(Total for Question 13 is 7 marks)

14 Here is a right-angled triangle.

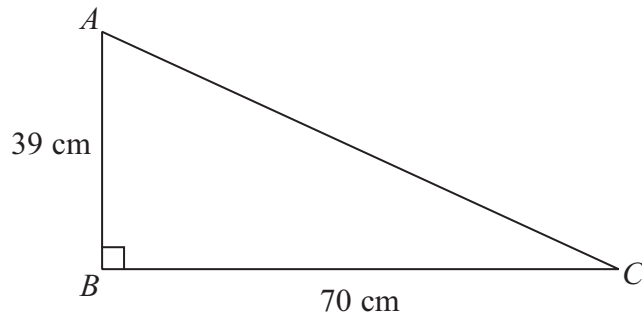


Diagram **NOT**
accurately drawn

Work out the length of AC .
Give your answer correct to 1 decimal place.

..... cm

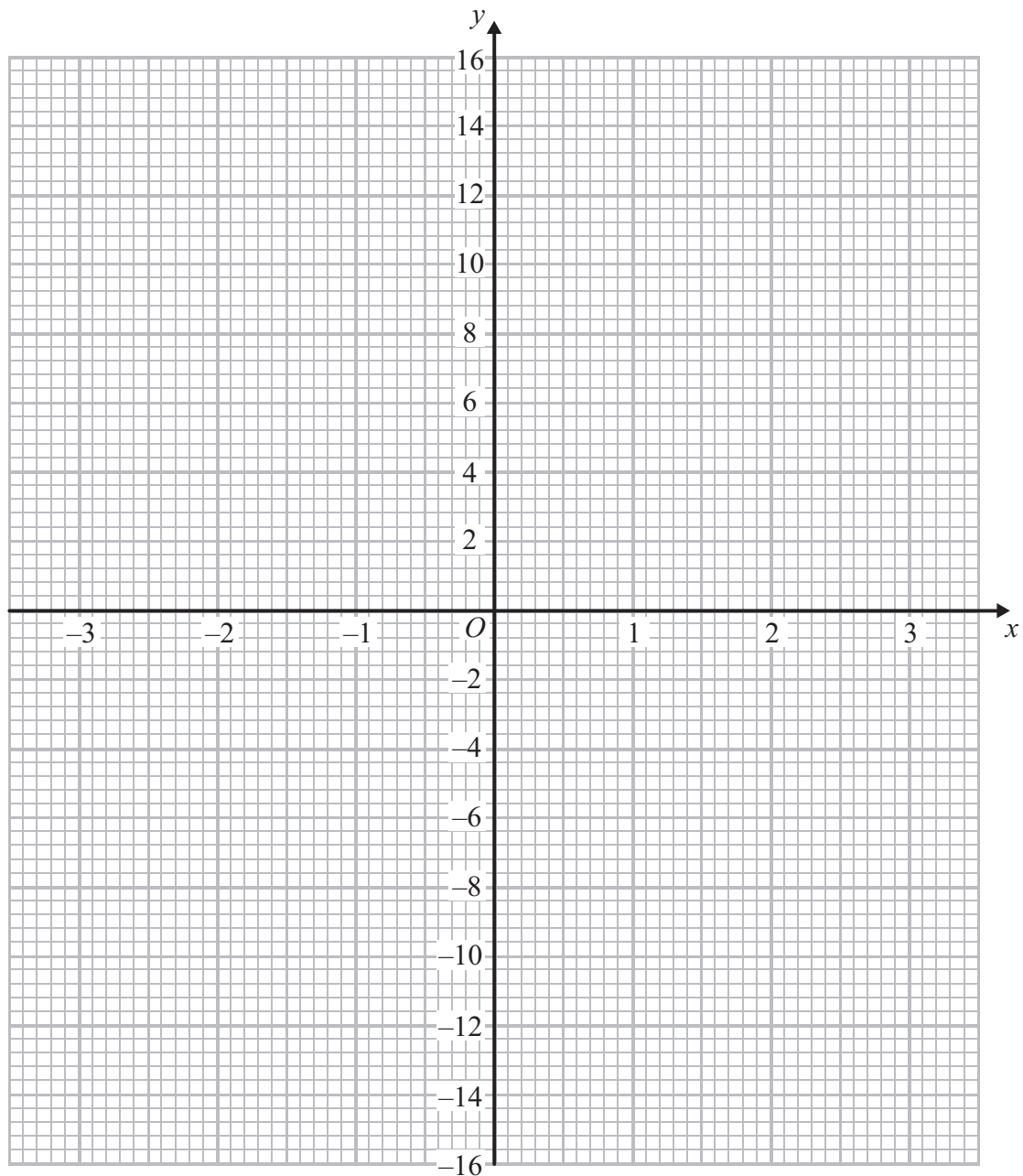
(Total for Question 14 is 3 marks)

15 (a) Complete the table of values for $y = x^3 - 4x$

| | | | | | | | |
|-----|----|----|----|---|---|---|----|
| x | -3 | -2 | -1 | 0 | 1 | 2 | 3 |
| y | | | 3 | 0 | | | 15 |

(2)

(b) On the grid, draw the graph of $y = x^3 - 4x$ from $x = -3$ to $x = 3$



(2)

(Total for Question 15 is 4 marks)

16 ABC is an isosceles triangle.

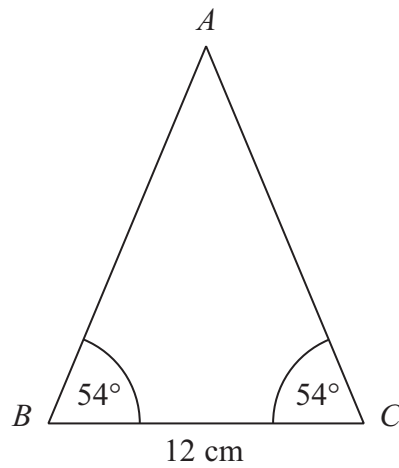


Diagram **NOT** accurately drawn

Work out the area of the triangle.
Give your answer correct to 3 significant figures.

..... cm²

(Total for Question 16 is 4 marks)

17 (a) Write 7.8×10^{-4} as an ordinary number.

.....
(1)

(b) Write 95 600 000 as a number in standard form.

.....
(1)

(Total for Question 17 is 2 marks)

18 In a sale normal prices are reduced by 20%.

A washing machine has a sale price of £464

By how much money is the normal price of the washing machine reduced?

£

(Total for Question 18 is 3 marks)

19 The diagram shows a trapezium.

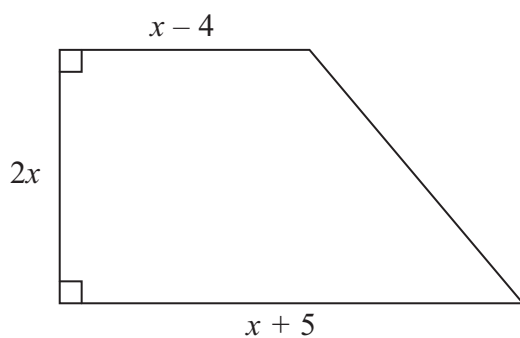


Diagram **NOT** accurately drawn

All the measurements are in centimetres.

The area of the trapezium is 351 cm^2 .

(a) Show that $2x^2 + x - 351 = 0$

(2)

(b) Work out the value of x .

.....
(3)

(Total for Question 19 is 5 marks)