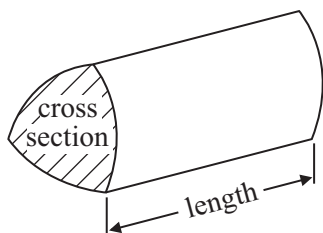


## GCSE Mathematics 1MA0

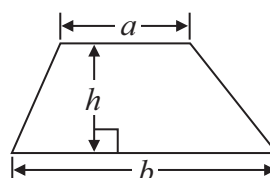
Formulae: Higher Tier

**You must not write on this formulae page.  
Anything you write on this formulae page will gain NO credit.**

**Volume of prism** = area of cross section  $\times$  length

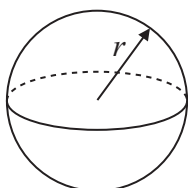


**Area of trapezium** =  $\frac{1}{2} (a + b)h$



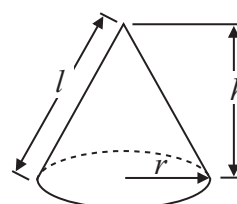
**Volume of sphere** =  $\frac{4}{3} \pi r^3$

**Surface area of sphere** =  $4\pi r^2$

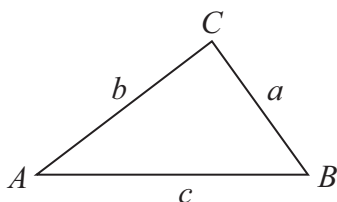


**Volume of cone** =  $\frac{1}{3} \pi r^2 h$

**Curved surface area of cone** =  $\pi r l$



**In any triangle ABC**



**The Quadratic Equation**

The solutions of  $ax^2 + bx + c = 0$  where  $a \neq 0$ , are given by

$$x = \frac{-b \pm \sqrt{b^2 - 4ac}}{2a}$$

**Sine Rule**  $\frac{a}{\sin A} = \frac{b}{\sin B} = \frac{c}{\sin C}$

**Cosine Rule**  $a^2 = b^2 + c^2 - 2bc \cos A$

**Area of triangle** =  $\frac{1}{2} ab \sin C$

**Answer ALL questions.**

**Write your answers in the spaces provided.**

**You must write down all stages in your working.**

**1** Here is a cuboid.

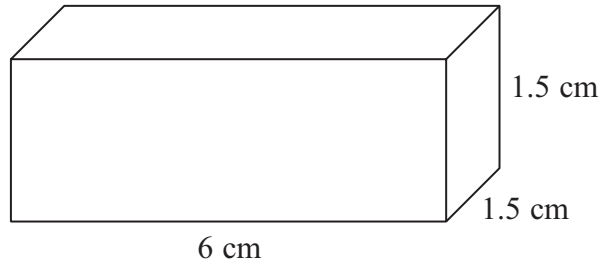


Diagram **NOT**  
accurately drawn

The cuboid is 6 cm by 1.5 cm by 1.5 cm.

Work out the total surface area of the cuboid.

..... cm<sup>2</sup>

**(Total for Question 1 is 3 marks)**

---

\*2 Here is a list of ingredients for making 18 mince pies.

**Ingredients for 18 mince pies**

225 g of butter  
350 g of flour  
100 g of sugar  
280 g of mincemeat  
1 egg

Elaine wants to make 45 mince pies.

Elaine has

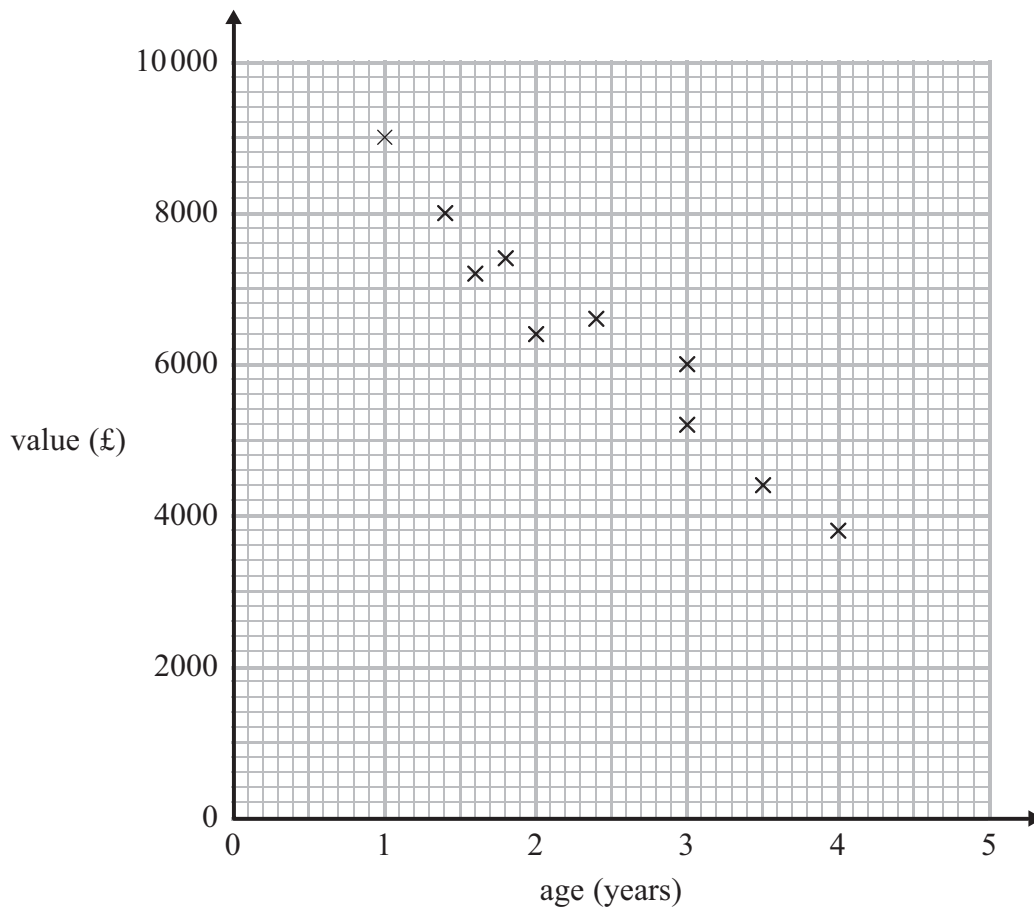
1 kg of butter  
1 kg of flour  
500 g of sugar  
600 g of mincemeat  
6 eggs

Does Elaine have enough of each ingredient to make 45 mince pies?  
You must show clearly how you got your answer.

---

**(Total for Question 2 is 4 marks)**

- 3 The scatter graph shows some information about 10 cars, of the same type and make.  
The graph shows the age (years) and the value (£) of each car.



The table shows the age and the value of two other cars of the same type and make.

<b>age (years)</b>	1	3.5
<b>value (£)</b>	8200	5000

- (a) On the scatter graph, plot the information from the table. (1)
- (b) Describe the relationship between the age and the value of the cars.

(1)

A car of the same type and make is  $2\frac{1}{2}$  years old.

- (c) Estimate the value of the car.  
£..... (2)

(Total for Question 3 is 4 marks)

4 Rhiana plays a game.

The probability that she will lose the game is 0.32

The probability that she will draw the game is 0.05

Rhiana is going to play the game 200 times.

Work out an estimate for the number of times Rhiana will win the game.

.....  
**(Total for Question 4 is 3 marks)**

---

5 Mason is doing a survey to find out how many magazines people buy.

He uses this question on his questionnaire.

How many magazines do you buy?		
<input type="checkbox"/>	<input type="checkbox"/>	<input type="checkbox"/>
0 to 4	4 to 8	8 to 12

(a) Write down **two** things wrong with this question.

1 .....

.....

2 .....

.....

(2)

(b) Write a better question for Mason to use on his questionnaire to find out how many magazines people buy.

(2)

Mason asks his friends at school to do his questionnaire.  
This may **not** be a good sample to use.

(c) Give **one** reason why.

.....

.....

.....

(1)

**(Total for Question 5 is 5 marks)**

6 Tame Valley is a company that makes yoghurt.

A machine fills trays of 20 pots with yoghurt.

In one hour, the machine fills a total of 15 000 pots.

Work out how many seconds the machine takes to fill each tray of 20 pots.

..... seconds

**(Total for Question 6 is 4 marks)**

---

7 Colin, Dave and Emma share some money.

Colin gets  $\frac{3}{10}$  of the money.

Emma and Dave share the rest of the money in the ratio 3 : 2

What is Dave's share of the money?

---

**(Total for Question 7 is 4 marks)**

---



8 The diagram shows the plan of a playground.

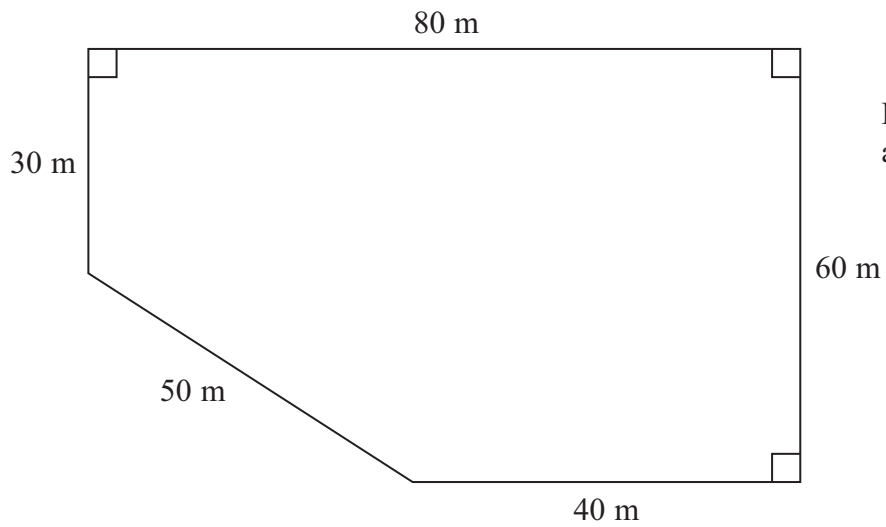


Diagram **NOT** accurately drawn

Bill is going to cover the playground with tarmac.  
It costs £2.56 to cover each square metre with tarmac.

Work out the total cost of the tarmac Bill needs.

£ .....

(Total for Question 8 is 4 marks)

9

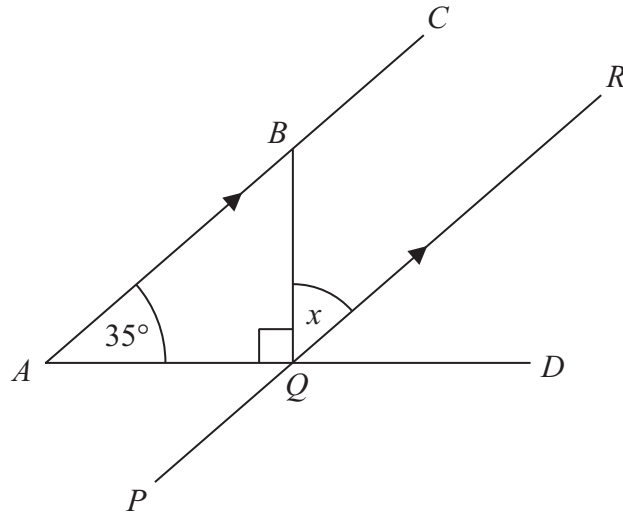


Diagram **NOT** accurately drawn

*ABC*, *PQR* and *AQD* are straight lines.  
*ABC* is parallel to *PQR*.

Angle *BAQ* =  $35^\circ$   
Angle *BQA* =  $90^\circ$

Work out the size of the angle marked *x*.  
Give reasons for each stage of your working.

$x =$  .....

(Total for Question 9 is 4 marks)

**10** The equation

$$x^3 + 2x = 110$$

has a solution between 4 and 5

Use a trial and improvement method to find this solution.

Give your answer correct to one decimal place.

You must show **ALL** your working.

$x =$  .....

---

**(Total for Question 10 is 4 marks)**

11  $XYZ$  is a right-angled triangle.

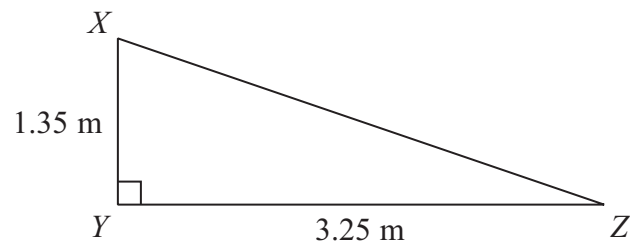


Diagram **NOT** accurately drawn

Calculate the length of  $XZ$ .  
Give your answer correct to 3 significant figures.

..... m

(Total for Question 11 is 3 marks)

**12** (a) Solve  $3(x - 2) = x + 7$

$x =$  .....  
(3)

(b) Solve  $\frac{2 - y}{5} = 1$

$y =$  .....  
(2)

---

**(Total for Question 12 is 5 marks)**

**\*13** Viv wants to invest £2000 for 2 years in the same bank.

**The International Bank**

Compound Interest

4% for the first year

1% for each extra year

**The Friendly Bank**

Compound Interest

5% for the first year

0.5% for each extra year

At the end of 2 years, Viv wants to have as much money as possible.

Which bank should she invest her £2000 in?

---

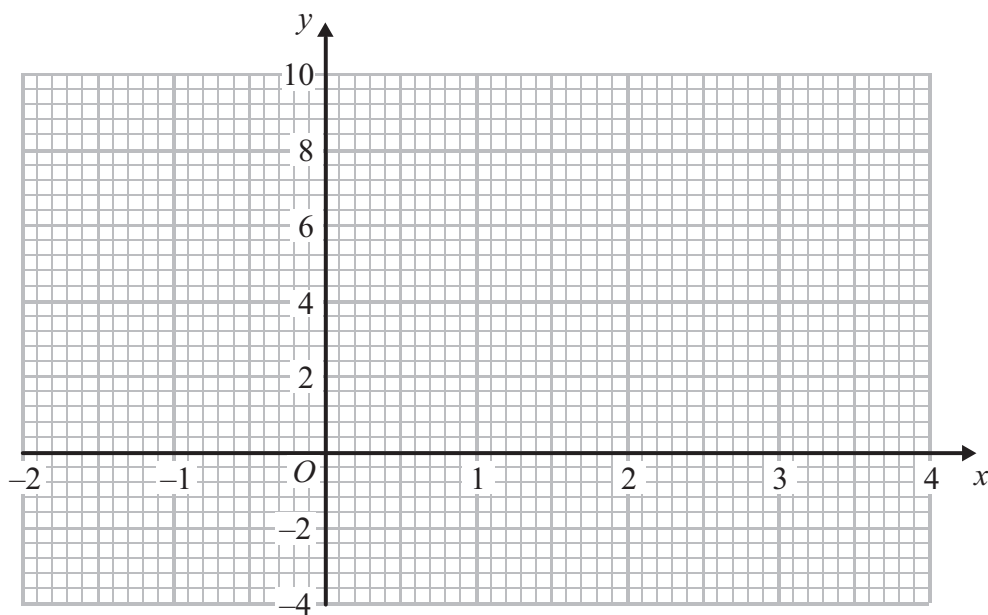
**(Total for Question 13 is 4 marks)**

14 (a) Complete the table of values for  $y = x^2 - 2x$

$x$	-2	-1	0	1	2	3	4
$y$		3	0			3	

(2)

(b) On the grid, draw the graph of  $y = x^2 - 2x$  for values of  $x$  from -2 to 4



(2)

(c) Solve  $x^2 - 2x - 2 = 1$

(2)

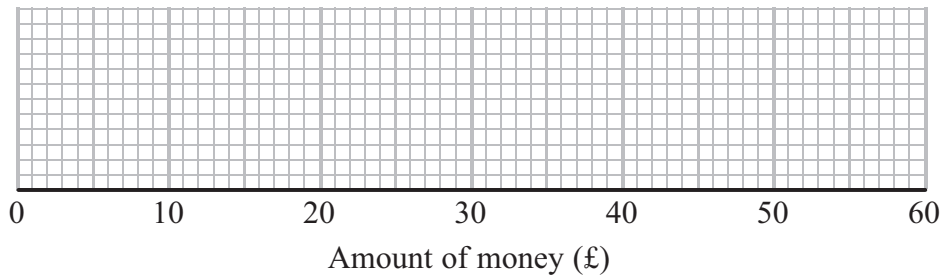
(Total for Question 14 is 6 marks)

15 Some girls did a sponsored swim to raise money for charity.

The table shows information about the amounts of money (£) the girls raised.

Least amount of money (£)	10
Greatest amount of money (£)	45
Median	25
Lower quartile	16
Upper quartile	42

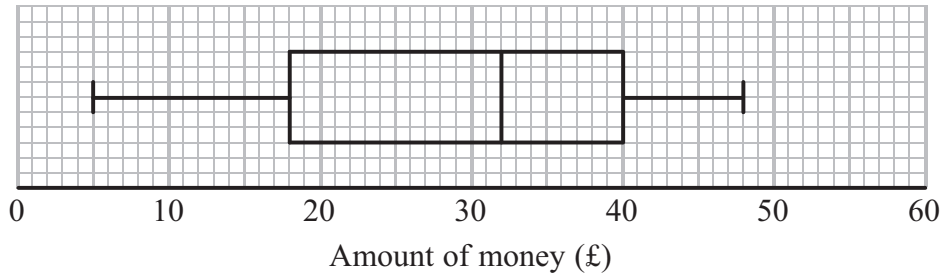
(a) On the grid, draw a box plot for the information in the table.



(2)

Some boys also did the sponsored swim.

The box plot shows information about the amounts of money (£) the boys raised.



(b) Compare the amounts of money the girls raised with the amounts of money the boys raised.

.....

.....

.....

.....

(2)

(Total for Question 15 is 4 marks)



\*16 The diagram shows a ladder leaning against a vertical wall.

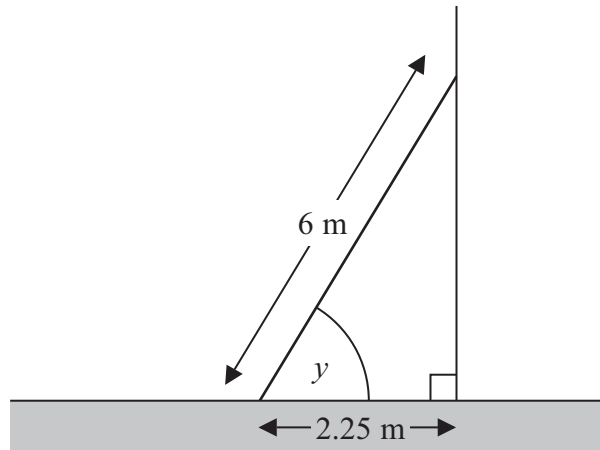


Diagram **NOT**  
accurately drawn

The ladder stands on horizontal ground.

The length of the ladder is 6 m.

The bottom of the ladder is 2.25 m from the bottom of the wall.

A ladder is safe to use when the angle marked  $y$  is about  $75^\circ$ .

Is the ladder safe to use?

You must show all your working.

(Total for Question 16 is 3 marks)