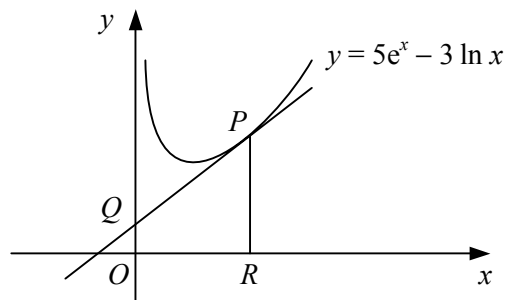


- 1 a Find an equation for the normal to the curve  $y = \frac{2}{5}x + \frac{1}{10}e^x$  at the point on the curve where  $x = 0$ , giving your answer in the form  $ax + by + c = 0$ , where  $a$ ,  $b$  and  $c$  are integers.  
b Find the coordinates of the point where this normal crosses the  $x$ -axis.

2



The diagram shows the curve with equation  $y = 5e^x - 3 \ln x$  and the tangent to the curve at the point  $P$  with  $x$ -coordinate 1.

- a Show that the tangent at  $P$  has equation  $y = (5e - 3)x + 3$ .

The tangent at  $P$  meets the  $y$ -axis at  $Q$ .

The line through  $P$  parallel to the  $y$ -axis meets the  $x$ -axis at  $R$ .

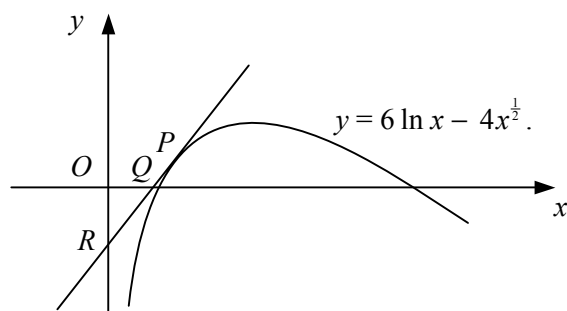
- b Find the area of trapezium  $ORPQ$ , giving your answer in terms of  $e$ .

3

A curve has equation  $y = 3x - \frac{1}{2}e^x$ .

- a Find the coordinates of the stationary point on the curve, giving your answers in terms of natural logarithms.  
b Determine the nature of the stationary point.

4



The diagram shows the curve  $y = 6 \ln x - 4x^{\frac{1}{2}}$ . The  $x$ -coordinate of the point  $P$  on the curve is 4. The tangent to the curve at  $P$  meets the  $x$ -axis at  $Q$  and the  $y$ -axis at  $R$ .

- a Find an equation for the tangent to the curve at  $P$ .  
b Hence, show that the area of triangle  $OQR$  is  $(10 - 12 \ln 2)^2$ .

5

The curve with equation  $y = 2x - 2 - \ln x$  passes through the point  $A(1, 0)$ . The tangent to the curve at  $A$  crosses the  $y$ -axis at  $B$  and the normal to the curve at  $A$  crosses the  $y$ -axis at  $C$ .

- a Find an equation for the tangent to the curve at  $A$ .  
b Show that the mid-point of  $BC$  is the origin.

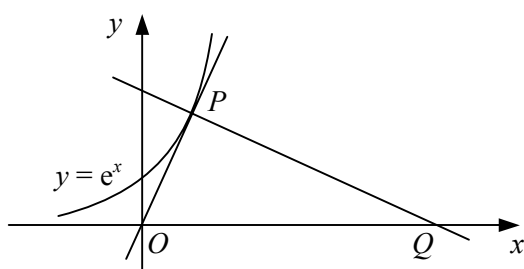
The curve has a minimum point at  $D$ .

- c Show that the  $y$ -coordinate of  $D$  is  $\ln 2 - 1$ .

- 6 a Sketch the curve with equation  $y = e^x + k$ , where  $k$  is a positive constant.  
Show on your sketch the coordinates of any points of intersection with the coordinate axes and the equations of any asymptotes.
- b Find an equation for the tangent to the curve at the point on the curve where  $x = 2$ .  
Given that the tangent passes through the  $x$ -axis at the point  $(-1, 0)$ ,
- c show that  $k = 2e^2$ .

- 7 A curve has equation  $y = 3x^2 - 2 \ln x$ ,  $x > 0$ .  
The gradient of the curve at the point  $P$  on the curve is  $-1$ .
- a Find the  $x$ -coordinate of  $P$ .
- b Find an equation for the tangent to the curve at the point on the curve where  $x = 1$ .

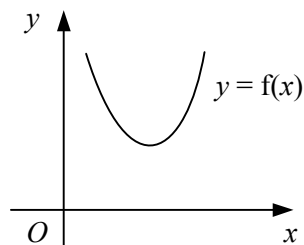
8



The diagram shows the curve with equation  $y = e^x$  which passes through the point  $P(p, e^p)$ .  
Given that the tangent to the curve at  $P$  passes through the origin and that the normal to the curve at  $P$  meets the  $x$ -axis at  $Q$ ,

- a show that  $p = 1$ ,
- b show that the area of triangle  $OPQ$ , where  $O$  is the origin, is  $\frac{1}{2}e(1 + e^2)$ .
- 9 The curve with equation  $y = 4 - e^x$  meets the  $y$ -axis at the point  $P$  and the  $x$ -axis at the point  $Q$ .
- a Find an equation for the normal to the curve at  $P$ .
- b Find an equation for the tangent to the curve at  $Q$ .  
The normal to the curve at  $P$  meets the tangent to the curve at  $Q$  at the point  $R$ .  
The  $x$ -coordinate of  $R$  is  $a \ln 2 + b$ , where  $a$  and  $b$  are rational constants.
- c Show that  $a = \frac{8}{5}$ .
- d Find the value of  $b$ .

10



The diagram shows a sketch of the curve  $y = f(x)$  where

$$f: x \rightarrow 9x^4 - 16 \ln x, \quad x > 0.$$

Given that the set of values of  $x$  for which  $f(x)$  is a decreasing function of  $x$  is  $0 < x \leq k$ , find the exact value of  $k$ .