

Write your name here

Surname

Other Names

# Mathematics

## Paper 1 (Non-Calculator) Higher Tier

Time: 1 hour 30 minutes

**You must have:** Ruler graduated in centimetres and millimetres, protractor, pair of compasses, pen, HB pencil, eraser.

Total Marks

### Instructions

- Use **black** ink or ball-point pen.
- **Fill in the boxes** at the top of this page with your name, centre number and candidate number.
- Answer **all** questions.
- Answer the questions in the spaces provided – there may be more space than you need.
- **Calculators may not be used.**
- Diagrams are **NOT** accurately drawn, unless otherwise indicated.
- You must **show all your working out.**



### Information

- The total mark for this paper is 80
- The marks for **each** question are shown in brackets – use this as a guide as to how much time to spend on each question.

### Advice

- Read each question carefully before you start to answer it.
- Keep an eye on the time.
- Try to answer every question.
- Check your answers if you have time at the end.

## Higher Tier Formulae Sheet

### Perimeter, area and volume

Where  $a$  and  $b$  are the lengths of the parallel sides and  $h$  is their perpendicular separation:

$$\text{Area of a trapezium} = \frac{1}{2}(a + b) h$$

Volume of a prism = area of cross section  $\times$  length

Where  $r$  is the radius and  $d$  is the diameter:

$$\text{Circumference of a circle} = 2\pi r = \pi d$$

$$\text{Area of a circle} = \pi r^2$$

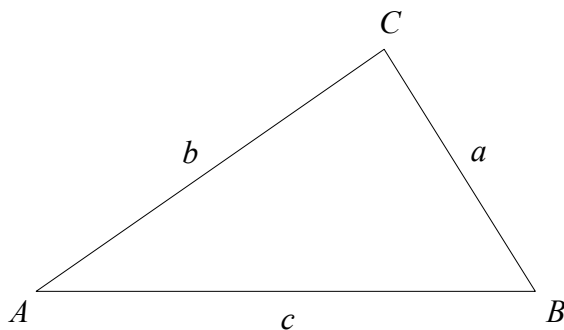
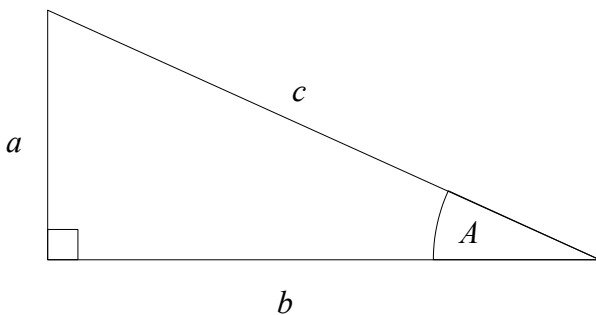
### Quadratic formula

The solution of  $ax^2 + bx + c = 0$

where  $a \neq 0$

$$x = \frac{-b \pm \sqrt{b^2 - 4ac}}{2a}$$

### Pythagoras' Theorem and Trigonometry



In any right-angled triangle where  $a$ ,  $b$  and  $c$  are the length of the sides and  $c$  is the hypotenuse:

$$a^2 + b^2 = c^2$$

In any right-angled triangle  $ABC$  where  $a$ ,  $b$  and  $c$  are the length of the sides and  $c$  is the hypotenuse:

$$\sin A = \frac{a}{c} \quad \cos A = \frac{b}{c} \quad \tan A = \frac{a}{b}$$

In any triangle  $ABC$  where  $a$ ,  $b$  and  $c$  are the length of the sides:

$$\text{sine rule: } \frac{a}{\sin A} = \frac{b}{\sin B} = \frac{c}{\sin C}$$

$$\text{cosine rule: } a^2 = b^2 + c^2 - 2bc \cos A$$

$$\text{Area of triangle} = \frac{1}{2} ab \sin C$$

### Compound Interest

Where  $P$  is the principal amount,  $r$  is the interest rate over a given period and  $n$  is number of times that the interest is compounded:

$$\text{Total accrued} = P \left( 1 + \frac{r}{100} \right)^n$$

### Probability

Where  $P(A)$  is the probability of outcome  $A$  and  $P(B)$  is the probability of outcome  $B$ :

$$P(A \text{ or } B) = P(A) + P(B) - P(A \text{ and } B)$$

$$P(A \text{ and } B) = P(A \text{ given } B) P(B)$$

**END OF EXAM AID**

1 Work out  $5.92 \div 0.16$

$$\frac{5.92}{0.16} = \frac{592}{16}$$

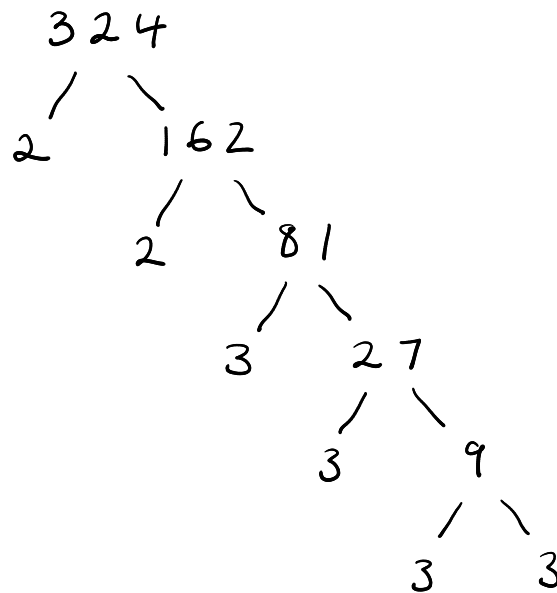
$$16 \overline{) 592} \begin{array}{r} 037 \\ \underline{592} \\ 0 \end{array}$$

- 16
- 32
- 48
- 64
- 80
- 96
- 112
- 128
- 144
- 160

..... 37

(Total for Question 1 is 3 marks)

2 Write 324 as a product of powers of its prime factors.



$$2 \times 2 \times 3 \times 3 \times 3 \times 3$$

.....  $2^2 \times 3^4$

(Total for Question 2 is 3 marks)

3 (a) Work out  $2\frac{2}{3} + 1\frac{3}{5}$

Give your answer as a mixed number.

$$5 \times \frac{8}{3} + \frac{8}{5} \times 3$$

$$5 \times \frac{8}{3} + \frac{8}{5} \times 3$$

$$\frac{40}{15} + \frac{24}{15} = \frac{64}{15} = 4\frac{4}{15}$$

$$\frac{4\frac{4}{15}}{\dots\dots\dots}$$

(2)

(b) Work out  $\frac{2}{3} \div \frac{3}{4}$

$$\frac{2}{3} \times \frac{4}{3} = \frac{8}{9}$$

$$\frac{\frac{8}{9}}{\dots\dots\dots}$$

(2)

(Total for Question 3 is 4 marks)

4 Work out the value of  $\frac{5^{-3} \times 5^7}{5}$

$$\frac{5^4}{5^1} = 5^3 = 125$$

$$\frac{125}{\dots\dots\dots}$$

(Total for Question 4 is 2 marks)

5 Tracey writes down three numbers  $a$ ,  $b$  and  $c$ .

$$\begin{array}{l} a:b = 3:5 \\ a:c = 4:7 \end{array} \quad \begin{array}{l} \times 4 \\ \times 3 \end{array}$$

(a) Find  $a:b:c$

$$\begin{array}{l} a:b \\ 12:20 \end{array} \quad \begin{array}{l} a:c \\ 12:21 \end{array}$$

$$\underline{12:20:21}$$

(2)

Jamie writes down three numbers  $d$ ,  $e$  and  $f$ .

$$\begin{array}{l} d=2e \\ f=3d \end{array}$$

(b) Find  $e:d:f$

$$\text{Let } e = 1$$

$$d = 2(1) = 2$$

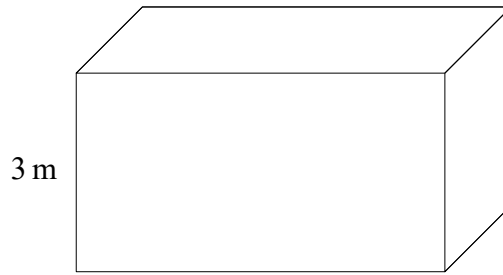
$$f = 3(2) = 6$$

$$\underline{1:2:6}$$

(2)

(Total for Question 5 is 4 marks)

6 The diagram shows a cuboid.



$$\text{pressure} = \frac{\text{force}}{\text{area}}$$

The cuboid has height 3 m

The volume of the cuboid is  $21 \text{ m}^3$

The pressure on the floor due to the cuboid is  $25 \text{ newtons/m}^2$  (pressure)

Work out the force exerted by the cuboid on the floor.

$$\text{Area of base} = \frac{21}{3} = 7 \text{ m}^2 \quad (\text{area})$$

$$25 = \frac{\text{force}}{7}$$

$$\text{force} = 25 \times 7 \quad \underline{\quad 175 \quad} \text{ newtons}$$

(Total for Question 6 is 3 marks)

7 In a bag there are counters.

The counters are all either red or blue or yellow.

The number of red counters : The number of blue counters : The number of yellow counters = 4 : 5 : 8

The number of yellow counters is 24 more than the numbers of blue counters.

Work out the total number of counters in the bag.

Red 8 8 8 8 32

Blue 8 8 8 8 8 40

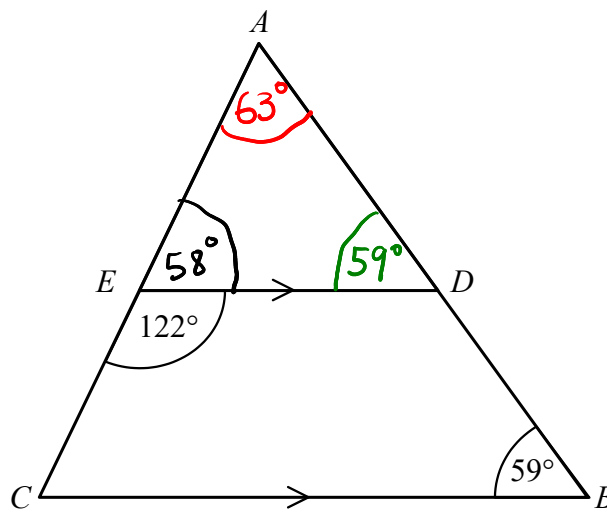
Yellow 8 8 8 8 8 8 8 8 64

$$\begin{array}{r} 32 \\ 40 \\ 64 \\ \hline 136 \\ \hline 136 \end{array}$$

$24 \div 3 = 8$  ↘ 24

(Total for Question 7 is 3 marks)

8  $ABC$  is a triangle.



$AEC$  and  $ADB$  are straight lines.

$ED$  is parallel to  $CB$ .

Angle  $CED = 122^\circ$

Angle  $ABC = 59^\circ$

Work out the size of angle  $CAB$ .

You must give a reason for each stage of your working.

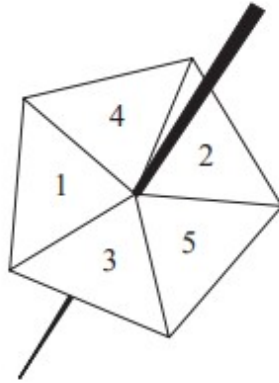
$AED = 58^\circ$  Angles on a straight line  
add to  $180^\circ$

$ADE = 59^\circ$  Corresponding angles are  
equal

$CAB = 63^\circ$  Angles in a triangle  
add to  $180^\circ$

(Total for Question 8 is 5 marks)

9 Roy spins a biased 5-sided spinner 48 times.



Here are his results.

<b>Score</b>	1	2	3	4	5
<b>Frequency</b>	9	10	6	7	16

Roy is now going to spin the spinner another two times.

Work out an estimate for the probability that he gets a score of 5 both times

$$\frac{16}{48} = \frac{8}{24} = \frac{4}{12} = \frac{1}{3}$$

$$\frac{1}{3} \times \frac{1}{3} = \frac{1}{9} \dots\dots\dots \frac{1}{9}$$

(Total for Question 9 is 2 marks)



10 Solve the simultaneous equations

$$\begin{array}{r} 2x - y = 4 \quad \times 5 \\ 5x + 2y = 7 \quad \times 2 \end{array}$$

$$\begin{array}{r} 10x - 5y = 20 \\ 10x + 4y = 14 \end{array}$$

$$-9y = 6$$

$$y = \frac{6}{-9} = \underline{\underline{-\frac{2}{3}}}$$

$$2x - -\frac{2}{3} = 4$$

$$2x + \frac{2}{3} = 4$$

$$6x + 2 = 12$$

$$6x = 10$$

$$x = \frac{10}{6} = \underline{\underline{\frac{5}{3}}}$$

$$x = \underline{\underline{\frac{5}{3}}}$$

$$y = \underline{\underline{-\frac{2}{3}}}$$

(Total for Question 10 is 4 marks)

- 11 Work out the value of  $8^{\frac{4}{3}} + \left(\frac{1}{3}\right)^{-3}$

$$8^{\frac{4}{3}} = 2^4 = 16$$

$$\left(\frac{1}{3}\right)^{-3} = 3^3 = 27$$

$$16 + 27 = \underline{\underline{43}}$$

43

(Total for Question 11 is 3 marks)

- 12 There are  $p$  counters in a bag.  
60 of the counters are white.

Jill takes at random 50 counters from the bag.  
8 of these 50 counters are white.

Work out an estimate for the value of  $p$ .

$$\frac{60}{p} = \frac{8}{50}$$

*(Handwritten green annotations: a curved arrow from 60 to 8 is labeled  $\times \frac{15}{2}$ , and a curved arrow from 8 to 50 is labeled  $\times \frac{15}{2}$ )*

$$\frac{60}{8} = \frac{30}{4} = \frac{15}{2}$$

$$50 \times \frac{15}{2}$$

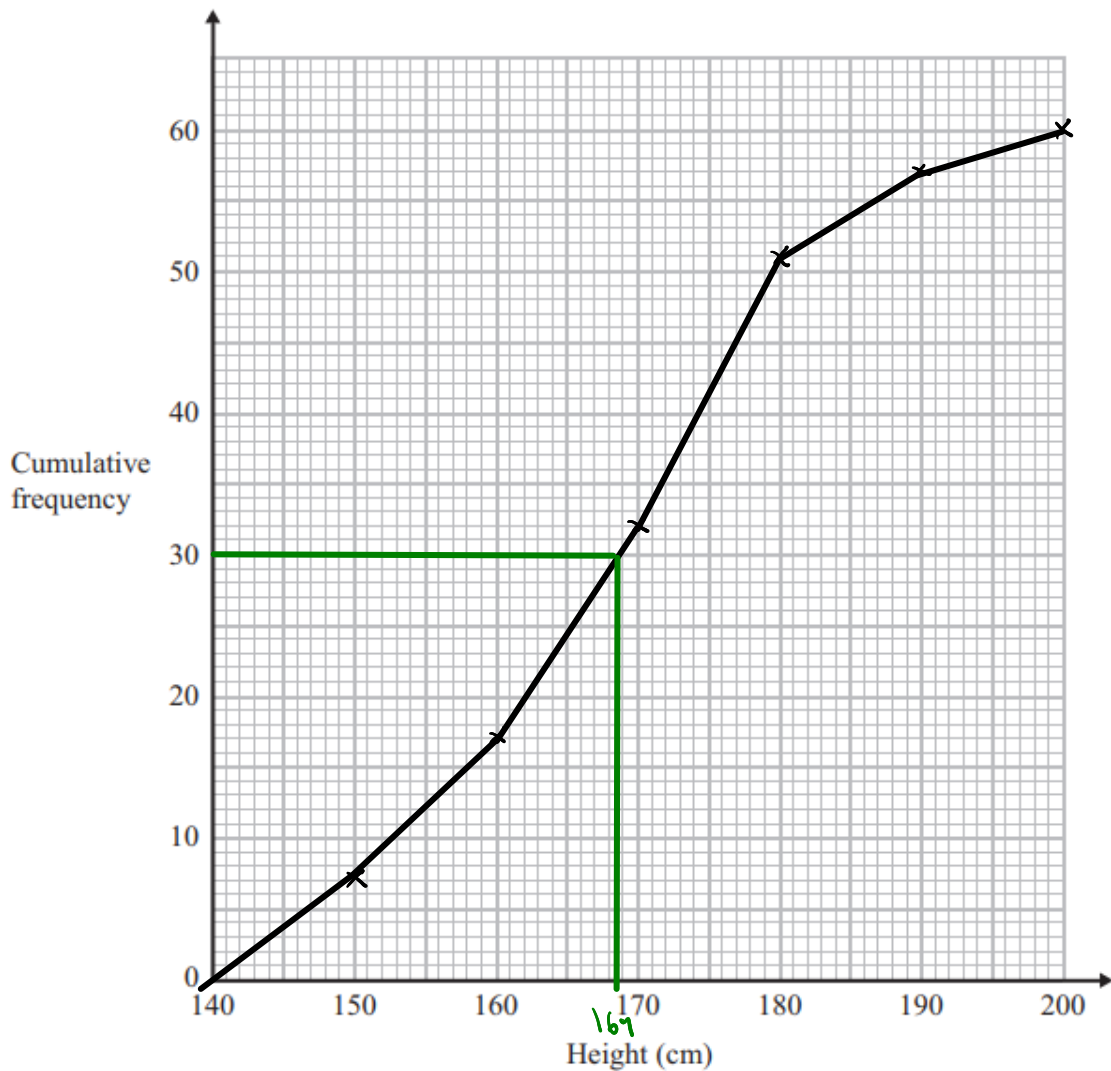
$$25 \times 15 = \underline{\underline{375}}$$

(Total for Question 12 is 2 marks)

13 The cumulative frequency table shows the height, in cm, of some tomato plants.

Height	Cumulative Frequency
$140 < h \leq 150$	7
$140 < h \leq 160$	17
$140 < h \leq 170$	32
$140 < h \leq 180$	51
$140 < h \leq 190$	57
$140 < h \leq 200$	60

(a) On the grid, plot a cumulative frequency graph for this information.



(2)

(b) Use the graph to find an estimate for the median height of the plants.

.....169..... cm  
(1)

(Total for Question 13 is 3 marks)

14  $x$  is inversely proportional to  $y$

Complete the table of values.

$x$	80	16	5	4
$y$	2	10	32	40

$$x = \frac{k}{y}$$
$$80 = \frac{k}{2}$$
$$k = 160$$
$$x = \frac{160}{y}$$
$$\underline{xy = 160}$$

(Total for Question 14 is 3 marks)

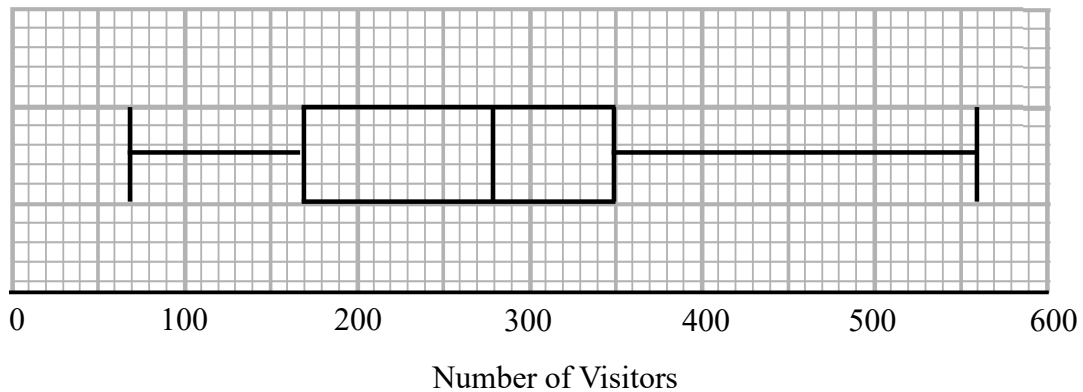
15 The straight line  $L$  has equation  $2y + 3x - 9 = 0$

Find an equation of the straight line perpendicular to  $L$  that passes through  $(3, -7)$

$$2y = -3x + 9$$
$$y = -\frac{3}{2}x + \frac{9}{2}$$
$$m = -\frac{3}{2} \quad \therefore \text{perp. } m = \frac{2}{3}$$
$$y = \frac{2}{3}x + c \quad \begin{matrix} (3, -7) \\ x \quad y \end{matrix}$$
$$-7 = \frac{2}{3}(3) + c$$
$$-7 = 2 + c$$
$$c = -9$$
$$\underline{y = \frac{2}{3}x - 9}$$

(Total for Question 15 is 3 marks)

- 16 The box plot shows the number of visitors to a park on each of 180 days.



Work out an estimate for the number of days there were fewer than 350 visitors to the park.

$\frac{3}{4}$  or 180      upper quartile

$$\frac{180}{4} = 45 \quad 45 \times 3 = 135 \quad \underline{\quad 135 \quad}$$

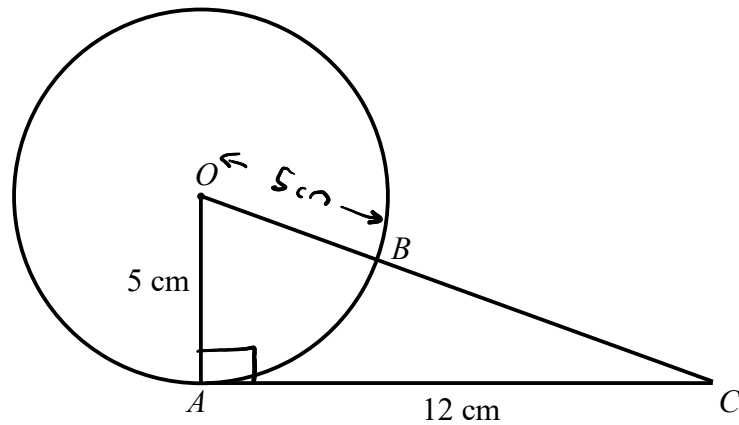
(Total for Question 16 is 2 marks)

- 17 Prove that the difference between the squares of two consecutive odd numbers is a multiple of 8.

odd number =  $2n+1$       next odd number =  $2n+3$

$$\begin{aligned} & (2n+3)^2 - (2n+1)^2 \\ & (2n+3)(2n+3) - (2n+1)(2n+1) \\ & (4n^2 + 6n + 6n + 9) - (4n^2 + 2n + 2n + 1) \\ & 4n^2 + 12n + 9 - 4n^2 - 4n - 1 \\ & 8n + 8 \\ & 8(n+1) \quad \therefore \text{always a multiple of 8} \end{aligned}$$

(Total for Question 17 is 4 marks)



$A$  and  $B$  are points on the circumference of a circle, centre  $O$ .  
 $AC$  is a tangent to the circle.  
 $OBC$  is a straight line.

$OA = 5$  cm  
 $AC = 12$  cm

Find the length of  $BC$ .  
 You must show all your working.

$$\begin{aligned} OA^2 + AC^2 &= OC^2 \\ 5^2 + 12^2 &= OC^2 \\ 169 &= OC^2 \\ OC &= 13 \text{ cm} \end{aligned}$$

$OB$  is a radius  $\therefore 5$  cm

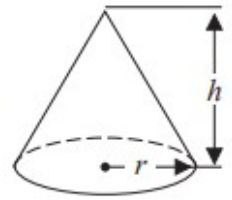
$$\begin{aligned} BC &= 13 - 5 \\ &= \underline{\underline{8 \text{ cm}}} \end{aligned}$$

..... 8 ..... cm

(Total for Question 18 is 4 marks)

- 19 A cone has height 12 cm and volume  $72\pi \text{ cm}^3$ .

$$\text{Volume of a cone} = \frac{1}{3} \pi r^2 h$$



Find the diameter of the cone.

Give your answer in the form  $a\sqrt{b}$  where  $a$  is an integer and  $b$  is a prime number.

$$72\pi = \frac{1}{3}\pi r^2 (12)$$

$$72 = 4r^2$$

$$r^2 = 18$$

$$r = \sqrt{18}$$

$$= \sqrt{9} \sqrt{2}$$

$$= 3\sqrt{2}$$

$$\frac{72}{4} = \frac{36}{2} = 18$$

$$\begin{aligned} \text{Diameter} &= 2 \times 3\sqrt{2} \\ &= 6\sqrt{2} \end{aligned}$$

$$\underline{\quad\quad\quad 6\sqrt{2} \quad\quad\quad} \text{ cm}$$

(Total for Question 19 is 4 marks)

20  $A, B$  and  $C$  are three points such that

$$\vec{AB} = 6\mathbf{a} + 9\mathbf{b}$$

$$\vec{AC} = 10\mathbf{a} + 15\mathbf{b}$$

(a) Prove that  $A, B$  and  $C$  lie on a straight line.

$$\vec{AB} = 3(2\mathbf{a} + 3\mathbf{b})$$

$$\vec{AC} = 5(2\mathbf{a} + 3\mathbf{b})$$

$\vec{AB}$  and  $\vec{AC}$  are both multiples of  $2\mathbf{a} + 3\mathbf{b}$   
and both pass through  $A$ .  $\therefore$  on a straight line. (2)

Three points  $D, E$  and  $F$  lie on a straight line such that

$$\vec{DE} = 4\mathbf{a} - 5\mathbf{b}$$

$$\vec{EF} = -12\mathbf{a} + 15\mathbf{b}$$

Find the ratio

length of  $DF$  : length of  $DE$

$$\begin{aligned}\vec{DF} &= \vec{DE} + \vec{EF} \\ &= \begin{pmatrix} 4 \\ -5 \end{pmatrix} + \begin{pmatrix} -12 \\ 15 \end{pmatrix} = \begin{pmatrix} -8 \\ 10 \end{pmatrix} \\ &= -8\mathbf{a} + 10\mathbf{b}\end{aligned}$$

$$\vec{DE} = \begin{pmatrix} 4 \\ -5 \end{pmatrix} \quad \vec{DF} = \begin{pmatrix} -8 \\ 10 \end{pmatrix}$$

$DF$  is twice as long

2 : 1

(3)

(Total for Question 20 is 5 marks)



21 The functions  $f$  and  $g$  are such that

$$f(x) = 3x^2 + 1 \text{ for } x > 0$$

and

$$g(x) = 2x - 3$$

(a) Find  $f^{-1}(x)$

→ square →  $\times 3$  →  $+ 1$

$$f^{-1}(x) = \sqrt{\frac{x-1}{3}}$$

$$f^{-1}(x) = \sqrt{\frac{x-1}{3}} \quad (2)$$

(b) Solve  $gf(x) = 95$

$$2(3x^2 + 1) - 3 = 95$$

$$6x^2 + 2 - 3 = 95$$

$$6x^2 - 1 = 95$$

$$6x^2 = 96$$

$$\frac{96}{6} = \frac{48}{3} = 16$$

$$x^2 = 16$$

$$x = 4$$

$$x = 4$$

(3)

(Total for Question 21 is 5 marks)

22 Write  $\frac{\sqrt{8}}{3-\sqrt{2}}$  in the form  $\frac{a\sqrt{2}+b}{c}$  where  $a$ ,  $b$  and  $c$  are integers.

$$\sqrt{8} = 2\sqrt{2}$$

$$\frac{2\sqrt{2}(3+\sqrt{2})}{(3-\sqrt{2})(3+\sqrt{2})}$$

$$\frac{6\sqrt{2}+4}{9+3\sqrt{2}-3\sqrt{2}-2}$$

$$\frac{6\sqrt{2}+4}{7}$$

$$\frac{6\sqrt{2}+4}{7}$$

---

(Total for Question 22 is 4 marks)

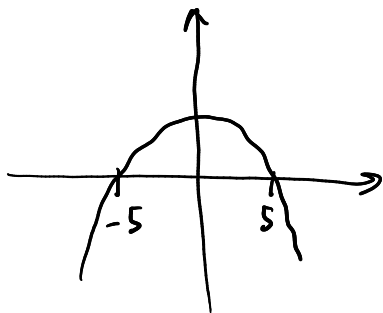
---

23 Find the set of values of  $x$  for which

$$25 - x^2 > 0 \quad \text{and} \quad 3x^2 - 17x - 6 < 0$$

You must show all your working.

$$(5 + x)(5 - x) > 0$$



$$\underline{\underline{-5 < x < 5}}$$

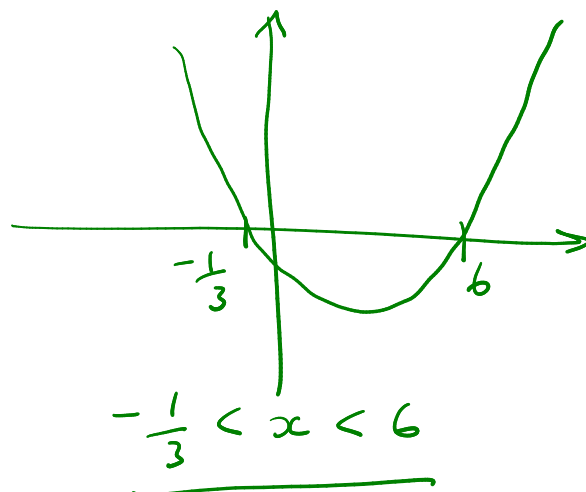
$$3x^2 - 17x - 6 < 0$$

$$\begin{array}{r} 3 \times 6 \\ = 18 \\ 1 \quad 18 \end{array}$$

$$3x^2 + x - 18x - 6$$

$$(x - 6)(3x + 1)$$

$$x = 6 \quad x = -\frac{1}{3}$$



$$\underline{\underline{-\frac{1}{3} < x < 6}}$$

Both satisfied when

$$\underline{\underline{-\frac{1}{3} < x < 5}}$$

$$\underline{\underline{-\frac{1}{3} < x < 5}}$$

(Total for Question 23 is 5 marks)

TOTAL FOR PAPER IS 80 MARKS