

Name: _____

GCSE (1 – 9)

The Sine Rule

Instructions

- Use **black** ink or ball-point pen.
- Answer all questions.
- Answer the questions in the spaces provided
– *there may be more space than you need.*
- Diagrams are **NOT** accurately drawn, unless otherwise indicated.
- You must **show all your working out.**

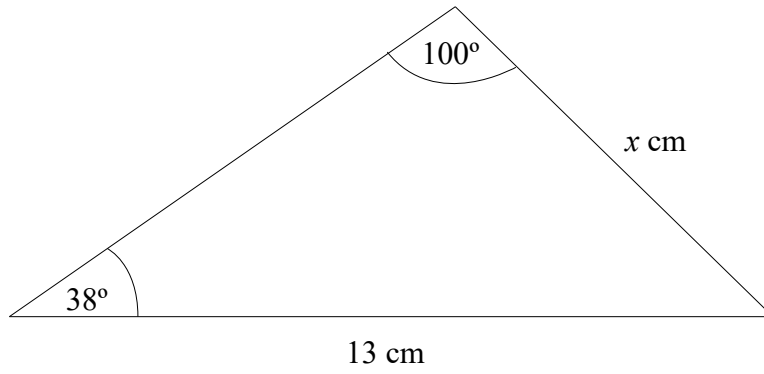
Information

- The marks for each question are shown in brackets
– *use this as a guide as to how much time to spend on each question.*

Advice

- Read each question carefully before you start to answer it.
- Keep an eye on the time.
- Try to answer every question.
- Check your answers if you have time at the end

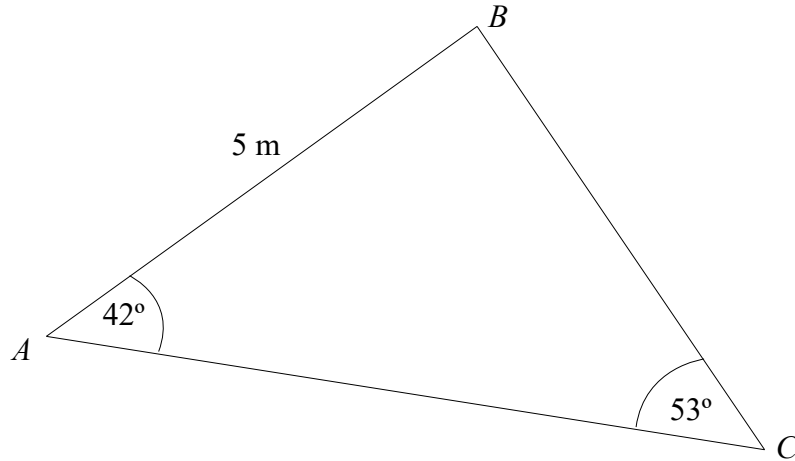
1



Work out the value of x .
Give your answer to 1 decimal place.

.....
(Total for question 1 is 3 marks)

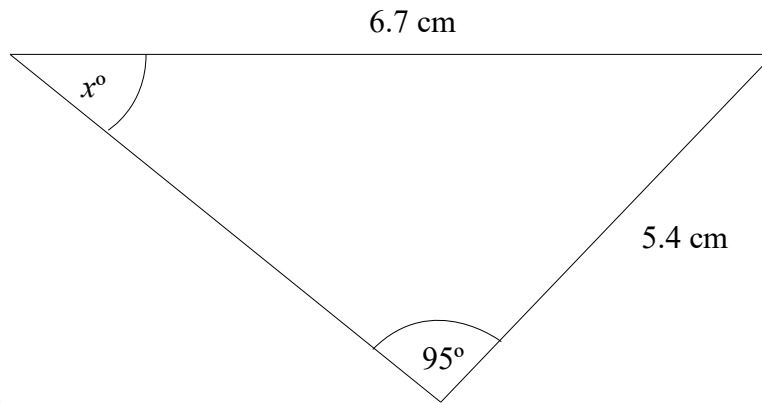
2



Work out the length of BC .
Give your answer to 3 significant figures.

.....m
(Total for question 2 is 3 marks)

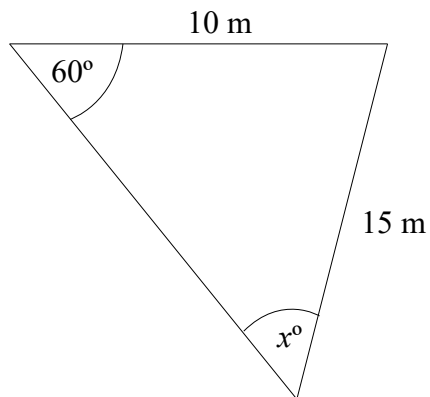
3



Work out the value of x .
Give your answer to 3 significant figures.

.....
(Total for question 3 is 3 marks)

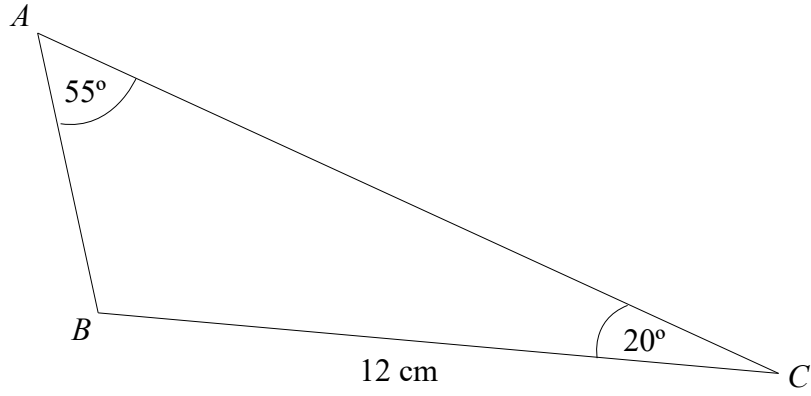
4



Work out the size of angle x .
Give your answer to 3 significant figures.

.....
(Total for question 4 is 3 marks)

5

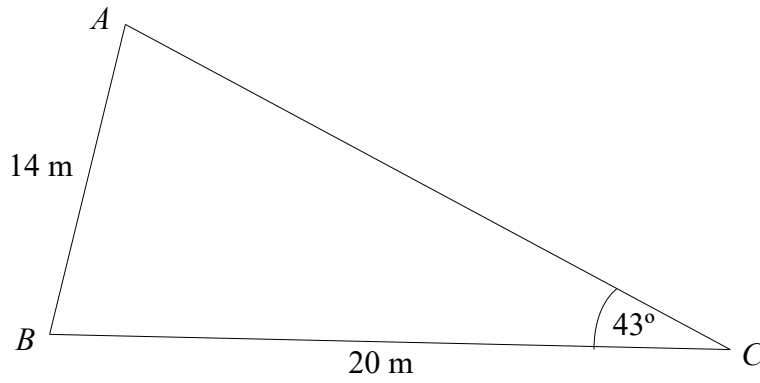


Work out the length of AC .
Give your answer to 1 decimal place.

.....cm

(Total for question 5 is 3 marks)

6

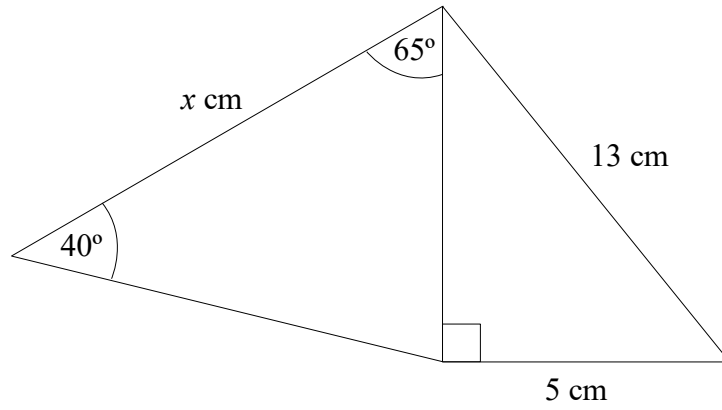


Work out the size of angle BAC .
Give your answer to 3 significant figures.

..... $^\circ$

(Total for question 6 is 3 marks)

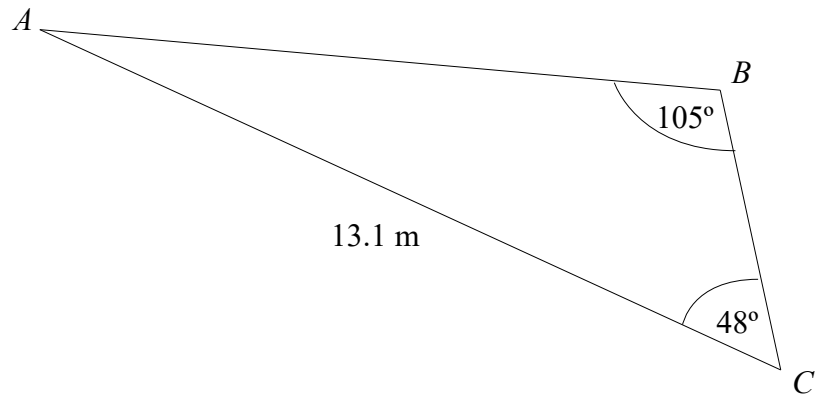
7



Work out the value of x .
Give your answer to 1 decimal place.

.....
(Total for question 7 is 5 marks)

8

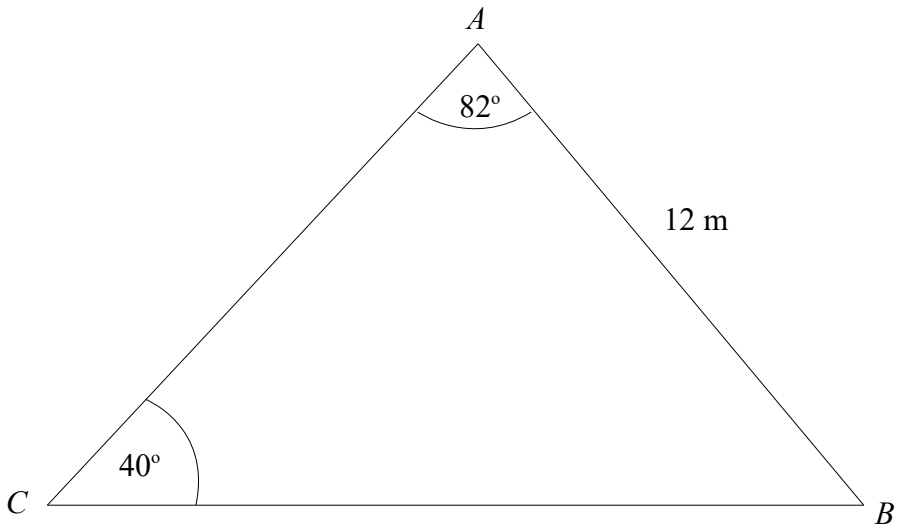


Work out the perimeter of triangle ABC .
Give your answer to 3 significant figures.

.....

(Total for question 8 is 4 marks)

9



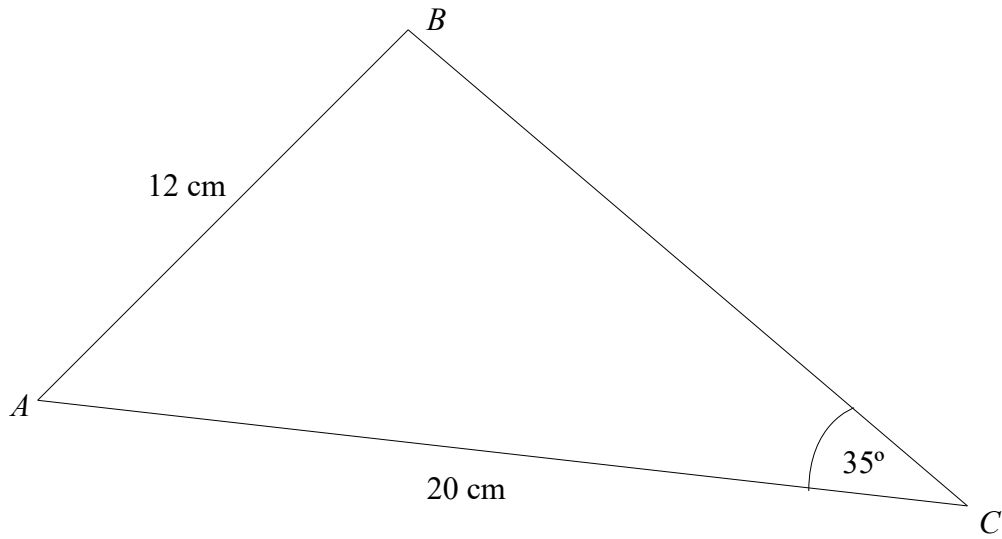
Work out the area of triangle ABC

Give your answer to 1 decimal place.

..... m^2

(Total for question 9 is 5 marks)

10



Angle ABC is obtuse.
Work out the size of angle ABC .
Give your answer to 3 significant figures.

.....^o

(Total for question 10 is 4 marks)