

Please check the examination details below before entering your candidate information

Candidate surname

Other names

**Pearson Edexcel
Level 3 GCE**

Centre Number

--	--	--	--	--

Candidate Number

--	--	--	--	--

Time 2 hours

Paper
reference

8MA0/01

Mathematics
Advanced Subsidiary
PAPER 1: Pure Mathematics

You must have:

Mathematical Formulae and Statistical Tables (Green), calculator

Total Marks

Candidates may use any calculator allowed by the regulations of the Joint Council for Qualifications. Calculators must not have the facility for symbolic algebra manipulation, differentiation and integration, or have retrievable mathematical formulae stored in them.

Instructions

- Use **black** ink or ball-point pen.
- If pencil is used for diagrams/sketches/graphs it must be dark (HB or B).
- **Fill in the boxes** at the top of this page with your name, centre number and candidate number.
- Answer **all** questions and ensure that your answers to parts of questions are clearly labelled.
- Answer the questions in the spaces provided
– *there may be more space than you need.*
- You should show sufficient working to make your methods clear.
Answers without working may not gain full credit.
- Inexact answers should be given to three significant figures unless otherwise stated.

Information

- A booklet 'Mathematical Formulae and Statistical Tables' is provided.
- There are 16 questions in this question paper. The total mark for this paper is 100.
- The marks for **each** question are shown in brackets
– *use this as a guide as to how much time to spend on each question.*

Advice

- Read each question carefully before you start to answer it.
- Try to answer every question.
- Check your answers if you have time at the end.
- Good luck with your examination.

Turn over ►

P66585A

©2021 Pearson Education Ltd.

1/1/1/1/



Pearson

2.

In this question you should show all stages of your working.

Solutions relying on calculator technology are not acceptable.

Given

$$\frac{9^{x-1}}{3^{y+2}} = 81$$

express y in terms of x , writing your answer in simplest form.

(3)



Question 2 continued

DO NOT WRITE IN THIS AREA

DO NOT WRITE IN THIS AREA

DO NOT WRITE IN THIS AREA

(Total for Question 2 is 3 marks)



P 6 6 5 8 5 A 0 5 4 4

3. Find

$$\int \frac{3x^4 - 4}{2x^3} dx$$

writing your answer in simplest form.

(4)

DO NOT WRITE IN THIS AREA

DO NOT WRITE IN THIS AREA

DO NOT WRITE IN THIS AREA



Question 3 continued

DO NOT WRITE IN THIS AREA

DO NOT WRITE IN THIS AREA

DO NOT WRITE IN THIS AREA

Lined writing area for the answer.

(Total for Question 3 is 4 marks)



5.

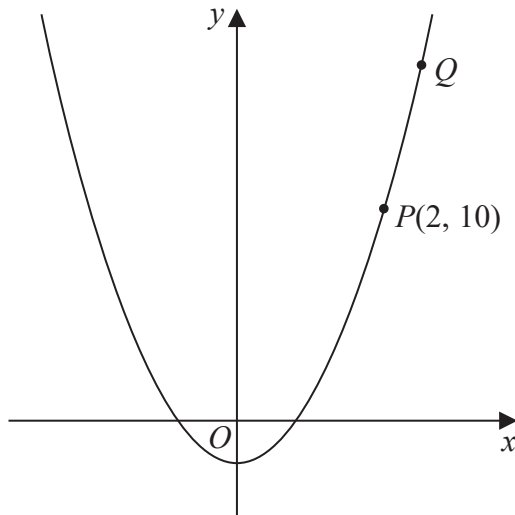


Figure 1

Figure 1 shows part of the curve with equation $y = 3x^2 - 2$

The point $P(2, 10)$ lies on the curve.

- (a) Find the gradient of the tangent to the curve at P . (2)

The point Q with x coordinate $2 + h$ also lies on the curve.

- (b) Find the gradient of the line PQ , giving your answer in terms of h in simplest form. (3)

- (c) Explain briefly the relationship between part (b) and the answer to part (a). (1)

DO NOT WRITE IN THIS AREA

DO NOT WRITE IN THIS AREA

DO NOT WRITE IN THIS AREA



Question 5 continued

DO NOT WRITE IN THIS AREA

DO NOT WRITE IN THIS AREA

DO NOT WRITE IN THIS AREA

(Total for Question 5 is 6 marks)



6. In this question you should show all stages of your working.

Solutions relying on calculator technology are not acceptable.

(a) Using algebra, find all solutions of the equation

$$3x^3 - 17x^2 - 6x = 0 \quad (3)$$

(b) Hence find all real solutions of

$$3(y-2)^6 - 17(y-2)^4 - 6(y-2)^2 = 0 \quad (3)$$



7. A parallelogram $PQRS$ has area 50 cm^2

Given

- PQ has length 14 cm
- QR has length 7 cm
- angle SPQ is obtuse

find

(a) the size of angle SPQ , in degrees, to 2 decimal places, (3)

(b) the length of the diagonal SQ , in cm, to one decimal place. (2)



Question 7 continued

DO NOT WRITE IN THIS AREA

DO NOT WRITE IN THIS AREA

DO NOT WRITE IN THIS AREA

A large area of the page is filled with horizontal lines for writing answers.

(Total for Question 7 is 5 marks)



8.

$$g(x) = (2 + ax)^8 \quad \text{where } a \text{ is a constant}$$

Given that one of the terms in the binomial expansion of $g(x)$ is $3402x^5$

(a) find the value of a .

(4)

Using this value of a ,

(b) find the constant term in the expansion of

$$\left(1 + \frac{1}{x^4}\right)(2 + ax)^8$$

(3)

DO NOT WRITE IN THIS AREA

DO NOT WRITE IN THIS AREA

DO NOT WRITE IN THIS AREA



Question 8 continued

DO NOT WRITE IN THIS AREA

DO NOT WRITE IN THIS AREA

DO NOT WRITE IN THIS AREA

(Total for Question 8 is 7 marks)



9. Find the value of the constant k , $0 < k < 9$, such that

$$\int_k^9 \frac{6}{\sqrt{x}} dx = 20$$

(4)

DO NOT WRITE IN THIS AREA

DO NOT WRITE IN THIS AREA

DO NOT WRITE IN THIS AREA



Question 9 continued

DO NOT WRITE IN THIS AREA

Lined writing area for the answer to Question 9.

(Total for Question 9 is 4 marks)



10. A student is investigating the following statement about natural numbers.

“ $n^3 - n$ is a multiple of 4”

- (a) Prove, using algebra, that the statement is true for all odd numbers. (4)
- (b) Use a counterexample to show that the statement is not always true. (1)



Question 10 continued

DO NOT WRITE IN THIS AREA

DO NOT WRITE IN THIS AREA

DO NOT WRITE IN THIS AREA

(Total for Question 10 is 5 marks)



P 6 6 5 8 5 A 0 2 3 4 4

11. The owners of a nature reserve decided to increase the area of the reserve covered by trees.

Tree planting started on 1st January 2005.

The area of the nature reserve covered by trees, $A \text{ km}^2$, is modelled by the equation

$$A = 80 - 45e^{ct}$$

where c is a constant and t is the number of years after 1st January 2005.

Using the model,

(a) find the area of the nature reserve that was covered by trees just before tree planting started.

(1)

On 1st January 2019 an area of 60 km^2 of the nature reserve was covered by trees.

(b) Use this information to find a complete equation for the model, giving your value of c to 3 significant figures.

(4)

On 1st January 2020, the owners of the nature reserve announced a long-term plan to have 100 km^2 of the nature reserve covered by trees.

(c) State a reason why the model is not appropriate for this plan.

(1)



Question 11 continued

DO NOT WRITE IN THIS AREA

DO NOT WRITE IN THIS AREA

DO NOT WRITE IN THIS AREA

(Total for Question 11 is 6 marks)



P 6 6 5 8 5 A 0 2 5 4 4

12. In this question you should show all stages of your working.

Solutions relying entirely on calculator technology are not acceptable.

(i) Solve, for $0 < \theta \leq 450^\circ$, the equation

$$5 \cos^2 \theta = 6 \sin \theta$$

giving your answers to one decimal place.

(5)

(ii) (a) A student's attempt to solve the question

“Solve, for $-90^\circ < x < 90^\circ$, the equation $3 \tan x - 5 \sin x = 0$ ”

is set out below.

$$\begin{aligned} 3 \tan x - 5 \sin x &= 0 \\ 3 \frac{\sin x}{\cos x} - 5 \sin x &= 0 \\ 3 \sin x - 5 \sin x \cos x &= 0 \\ 3 - 5 \cos x &= 0 \\ \cos x &= \frac{3}{5} \\ x &= 53.1^\circ \end{aligned}$$

Identify two errors or omissions made by this student, giving a brief explanation of each.

(2)

The first four positive solutions, in order of size, of the equation

$$\cos(5\alpha + 40^\circ) = \frac{3}{5}$$

are $\alpha_1, \alpha_2, \alpha_3$ and α_4

(b) Find, to the nearest degree, the value of α_4

(2)



Question 12 continued

DO NOT WRITE IN THIS AREA

DO NOT WRITE IN THIS AREA

DO NOT WRITE IN THIS AREA



Question 12 continued

DO NOT WRITE IN THIS AREA

DO NOT WRITE IN THIS AREA

DO NOT WRITE IN THIS AREA

(Total for Question 12 is 9 marks)



P 6 6 5 8 5 A 0 2 9 4 4

13.

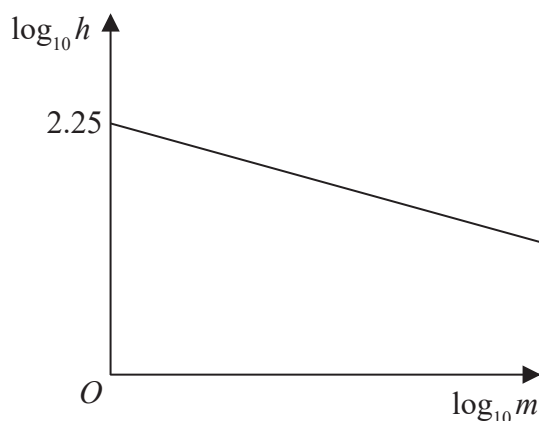


Figure 2

The resting heart rate, h , of a mammal, measured in beats per minute, is modelled by the equation

$$h = pm^q$$

where p and q are constants and m is the mass of the mammal measured in kg.

Figure 2 illustrates the linear relationship between $\log_{10} h$ and $\log_{10} m$

The line meets the vertical $\log_{10} h$ axis at 2.25 and has a gradient of -0.235

(a) Find, to 3 significant figures, the value of p and the value of q .

(3)

A particular mammal has a mass of 5 kg and a resting heart rate of 119 beats per minute.

(b) Comment on the suitability of the model for this mammal.

(3)

(c) With reference to the model, interpret the value of the constant p .

(1)



14. A curve C has equation $y = f(x)$ where

$$f(x) = -3x^2 + 12x + 8$$

(a) Write $f(x)$ in the form

$$a(x + b)^2 + c$$

where a , b and c are constants to be found.

(3)

The curve C has a maximum turning point at M .

(b) Find the coordinates of M .

(2)

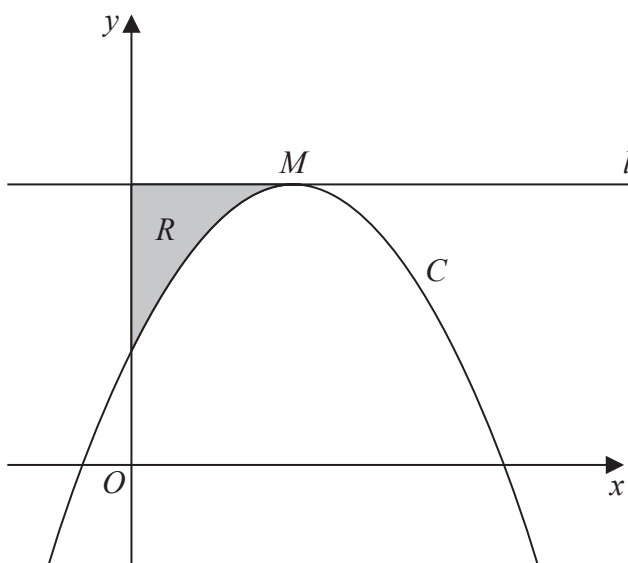


Figure 3

Figure 3 shows a sketch of the curve C .

The line l passes through M and is parallel to the x -axis.

The region R , shown shaded in Figure 3, is bounded by C , l and the y -axis.

(c) Using algebraic integration, find the area of R .

(5)



Question 14 continued

DO NOT WRITE IN THIS AREA

DO NOT WRITE IN THIS AREA

DO NOT WRITE IN THIS AREA



P 6 6 5 8 5 A 0 3 5 4 4

15.

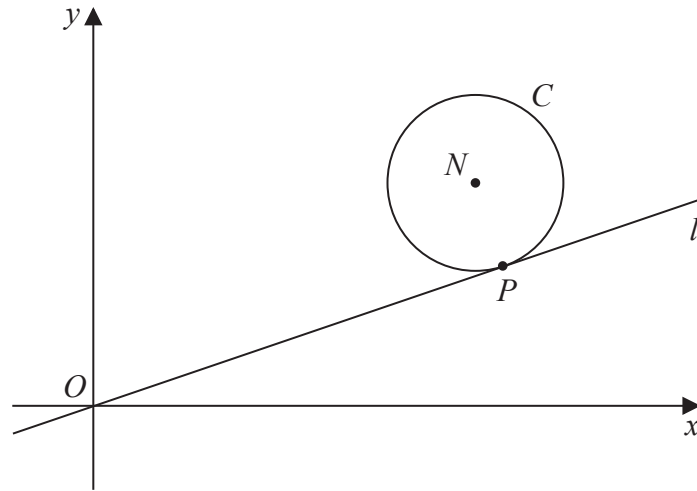


Figure 4

Figure 4 shows a sketch of a circle C with centre $N(7, 4)$

The line l with equation $y = \frac{1}{3}x$ is a tangent to C at the point P .

Find

(a) the equation of line PN in the form $y = mx + c$, where m and c are constants, (2)

(b) an equation for C . (4)

The line with equation $y = \frac{1}{3}x + k$, where k is a non-zero constant, is also a tangent to C .

(c) Find the value of k . (3)



Question 15 continued

DO NOT WRITE IN THIS AREA

DO NOT WRITE IN THIS AREA

DO NOT WRITE IN THIS AREA

Multiple horizontal lines for writing.



16. The curve C has equation $y = f(x)$ where

$$f(x) = ax^3 + 15x^2 - 39x + b$$

and a and b are constants.

Given

- the point $(2, 10)$ lies on C
- the gradient of the curve at $(2, 10)$ is -3

(a) (i) show that the value of a is -2

(ii) find the value of b .

(4)

(b) Hence show that C has no stationary points.

(3)

(c) Write $f(x)$ in the form $(x - 4)Q(x)$ where $Q(x)$ is a quadratic expression to be found.

(2)

(d) Hence deduce the coordinates of the points of intersection of the curve with equation

$$y = f(0.2x)$$

and the coordinate axes.

(2)



Question 16 continued

Lined writing area for the answer to Question 16.

DO NOT WRITE IN THIS AREA

DO NOT WRITE IN THIS AREA

DO NOT WRITE IN THIS AREA



